

DATE : 04/05/2025

Test Booklet Code



47

NARMADA

Corporate Office : 3rd Floor, Incuspaze Campus-2, Plot No. 13,
Sector-18, Udyog Vihar, Gurugram, Haryana - 122015

Answers & Solutions for NEET (UG)-2025

Time : 3 hrs.

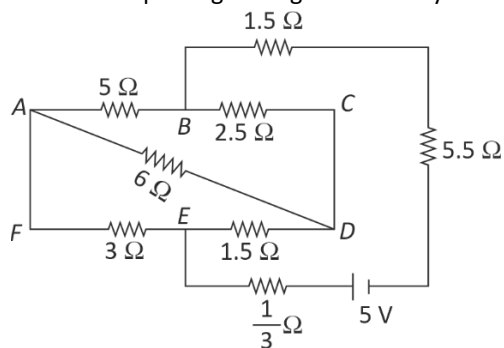
M.M.: 720

Important Instructions:

1. The test is of **3 hours** duration and the Test Booklet contains **180** multiple choice questions (Four options with a single correct answer) from **Physics, Chemistry and Biology (Botany and Zoology)**.
2. Each question carries **4 marks**. For each correct response, the candidate will get **4 marks**. For every wrong response **1 mark** shall be deducted from the total scores. The maximum marks are **720**.
3. Use **Blue / Black Ball Point Pen only** for writing particulars on this page / marking responses on Answer Sheet.
4. Rough work is to be done in the space provided for this purpose in the Test Booklet only.
5. On completion of the test, the candidate **must hand over the Answer Sheet (ORIGINAL and OFFICE Copy)** to the Invigilator before leaving the Room / Hall. The candidates are allowed to take away this Test Booklet with them.
6. The CODE for this Booklet is **47**.
7. The candidates should ensure that the Answer Sheet is not folded. Do not make any stray marks on the Answer Sheet. Do not write your Roll No. anywhere else except in the specified space in the Test Booklet/Answer Sheet. Use of white fluid for correction is **NOT** permissible on the Answer Sheet.
8. Each candidate must show on-demand his/her Admit Card to the Invigilator.
9. No candidate, without special permission of the Centre Superintendent or Invigilator, would leave his/her seat.
10. Use of Electronic/Manual Calculator is prohibited.
11. The candidates are governed by all Rules and Regulations of the examination with regard to their conduct in the Examination Room/Hall. All cases of unfair means will be dealt with as per Rules and Regulations of this examination along with Public Examinations (Prevention of unfair means act 2024).
12. **No part of the Test Booklet and Answer Sheet shall be detached under any circumstances.**
13. The candidates will write the Correct Test Booklet Code as given in the Test Booklet / Answer Sheet in the Attendance Sheet.

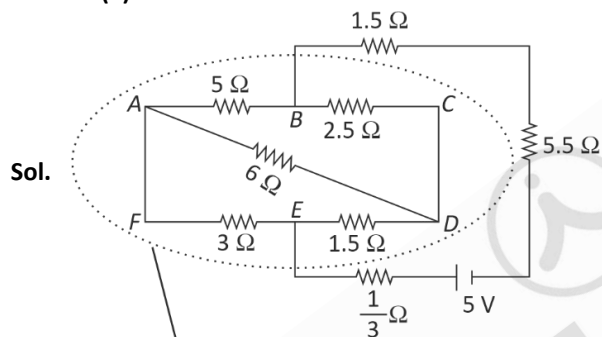
PHYSICS

1. The current passing through the battery in the given circuit, is:



- (1) 1.5 A (2) 2.0 A
(3) 0.5 A (4) 2.5 A

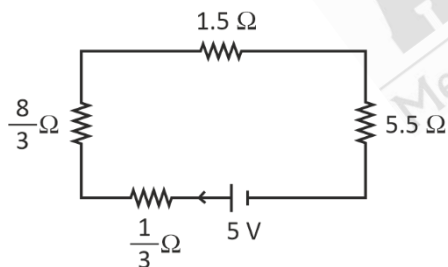
Answer (3)



Balanced wheatstone bridge

$$\therefore \text{its equivalent } R' = \frac{4 \times 8}{12} = \frac{8}{3} \Omega$$

Circuit can be redrawn as



$$R_{eq} = \frac{8}{3} + \frac{1}{3} + 1.5 + 5.5$$

$$= 10 \, \Omega$$

$$i = \frac{V}{R_{eq}} = \frac{5}{10} = 0.5A$$

2. The electric field in a plane electromagnetic wave is given by

$$E_z = 60 \cos (5x + 1.5 \times 10^9 t) \text{ V/m.}$$

Then expression for the corresponding magnetic field is (here subscripts denote the direction of the field) :

- $$\begin{array}{ll} (1) & B_y = 60 \sin (5x + 1.5 \times 10^9 t) T \\ (2) & B_y = 2 \times 10^{-7} \cos (5x + 1.5 \times 10^9 t) T \\ (3) & B_x = 2 \times 10^{-7} \cos (5x + 1.5 \times 10^9 t) T \\ (4) & B_z = 60 \cos (5x + 1.5 \times 10^9 t) T \end{array}$$

Answer (2)

Sol. In electromagnetic wave, E and B are in same phase and $B_0 = \frac{E_0}{c}$; their planes are perpendicular to each other.

$$\therefore B_y = \frac{60}{c} \cos(5x + 1.5 \times 10^9 t) \text{ T}$$

$$= \frac{60}{3 \times 10^8} \cos(5x + 1.5 \times 10^9 t) \text{ T}$$

$$B_y = 2 \times 10^{-7} \cos(5x + 1.5 \times 10^9 t) \text{ T}$$

3. A pipe open at both ends has a fundamental frequency f in air. The pipe is now dipped vertically in a water drum to half of its length. The fundamental frequency of the air column is now equal to:

(1) $2f$

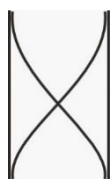
(2) $\frac{f}{2}$

(3) f

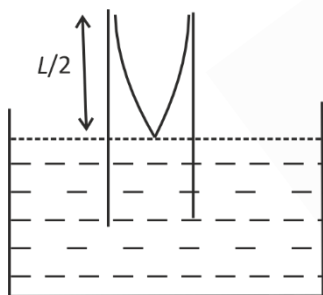
(4) $\frac{3f}{2}$

Answer (3)

Sol. Fundamental frequency of open pipe (at both ends) $f = \frac{v}{2L}$... (i)



Now immersed in water open pipe behaves as closed pipe.



$$f' = \frac{v}{4\left(\frac{L}{2}\right)} = \frac{v}{2L} \quad \dots \text{(ii)}$$

$$f = f'$$

4. An electron (mass $9 \times 10^{-31} \text{ kg}$ and charge $1.6 \times 10^{-19} \text{ C}$) moving with speed $c/100$ (c = speed of light) is injected into a magnetic field \vec{B} of magnitude $9 \times 10^{-4} \text{ T}$ perpendicular to its direction of motion. We wish to apply a uniform electric field \vec{E} together with the magnetic field so that the electron does not deflect from its path. Then (speed of light $c = 3 \times 10^8 \text{ ms}^{-1}$)

(1) \vec{E} is parallel to \vec{B} and its magnitude is $27 \times 10^4 \text{ V m}^{-1}$

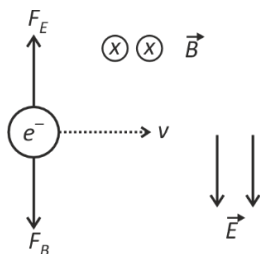
(2) \vec{E} is perpendicular to \vec{B} and its magnitude is $27 \times 10^4 \text{ V m}^{-1}$

(3) \vec{E} is perpendicular to \vec{B} and its magnitude is $27 \times 10^2 \text{ V m}^{-1}$

(4) \vec{E} is parallel to \vec{B} and its magnitude is $27 \times 10^2 \text{ V m}^{-1}$

Answer (3)

Sol. For no deflection of electron, $\vec{F}_B = \vec{F}_E$



$$-e(\vec{v} \times \vec{B}) = -e\vec{E}$$

$$\Rightarrow \vec{E} = \vec{v} \times \vec{B} \Rightarrow \vec{E} \perp \vec{B}$$

$$E = vB = \frac{c}{100} \times 9 \times 10^{-4}$$

$$= \frac{3 \times 10^8}{100} \times 9 \times 10^{-4}$$

$$= 27 \times 10^2 \text{ V m}^{-1}$$

5. In a certain camera, a combination of four similar thin convex lenses are arranged axially in contact. Then the power of the combination and the total magnification in comparison to the power (p) and magnification (m) for each lens will be, respectively

- (1) p^4 and m^4 (2) $4p$ and $4m$
(3) p^4 and $4m$ (4) $4p$ and m^4

Answer (4)

Sol. For series combination of lens

$$p_{\text{eff}} = p_1 + p_2 + p_3 + p_4 = 4p$$

$$m_{\text{eff}} = m_1 \times m_2 \times m_3 \times m_4 = m^4$$

6. A 2 amp current is flowing through two different small circular copper coils having radii ratio 1 : 2. The ratio of their respective magnetic moments will be

- (1) 4 : 1 (2) 1 : 4
(3) 1 : 2 (4) 2 : 1

Answer (2)

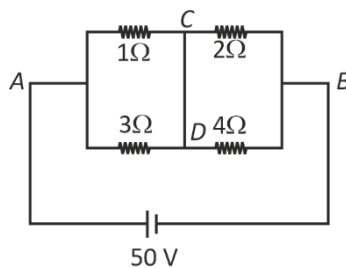
Sol. Magnetic moment of current carrying circular loop = IA

$$M = IA$$

$$M \propto A \quad [I - \text{Same}]$$

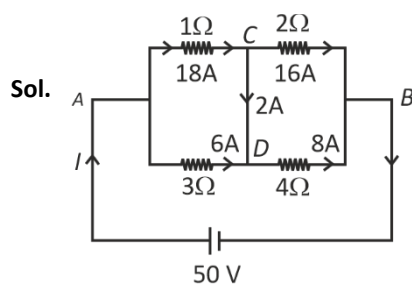
$$\frac{M_1}{M_2} = \frac{A_1}{A_2} = \frac{\pi r_1^2}{\pi r_2^2} = \left(\frac{1}{2}\right)^2 = \frac{1}{4}$$

7. A constant voltage of 50 V is maintained between the points A and B of the circuit shown in the figure. The current through the branch CD of the circuit is:



- (1) 3.0 A (2) 1.5 A
(3) 2.0 A (4) 2.5 A

Answer (3)



$R_{AB} = (1\Omega/3\Omega)$ in series with $(2\Omega/4\Omega)$

$$= \frac{3 \times 1}{3 + 1} + \frac{2 \times 4}{2 + 4}$$

$$= \frac{3}{4} + \frac{8}{6} = \frac{9 + 16}{12} = \frac{25}{12} \Omega$$

Now total current through cell

$$I = \frac{50}{\frac{25}{12}} = 24 \text{ A}$$

$$I_{1\Omega} = \frac{3}{4} \times 24 = 18 \text{ A}, I_{3\Omega} = \frac{1}{4} \times 24 = 6 \text{ A}$$

$$I_{2\Omega} = \frac{4}{6} \times 24 = 16 \text{ A}, I_{4\Omega} = \frac{2}{6} \times 24 = 8 \text{ A}$$

Using junction rule at C, $I_{CD} = 18 - 16 = 2 \text{ A}$ (From C to D)

8. Two gases A and B are filled at the same pressure in separate cylinders with movable pistons of radius r_A and r_B , respectively. On supplying an equal amount of heat to both the systems reversibly under constant pressure, the pistons of gas A and B are displaced by 16 cm and 9 cm, respectively. If the change in their internal energy is the same, then the ratio $\frac{r_A}{r_B}$ is equal to

(1) $\frac{\sqrt{3}}{2}$

(2) $\frac{4}{3}$

(3) $\frac{3}{4}$

(4) $\frac{2}{\sqrt{3}}$

Answer (3)

Sol. Using first law of thermodynamics

$$\Delta Q = \Delta U + P\Delta V$$

ΔQ is same

ΔU is also same

$$W_A = W_B$$

$$\therefore (P\Delta V)_A = (P\Delta V)_B$$

P is also same

$$\therefore A_A d_A = A_B d_B$$

$$\pi r_A^2 d_A = \pi r_B^2 d_B$$

$$\frac{r_A}{r_B} = \left(\frac{d_B}{d_A} \right)^{\frac{1}{2}} = \left(\frac{9}{16} \right)^{\frac{1}{2}}$$

$$= \frac{3}{4}$$

9. A container has two chambers of volumes $V_1 = 2$ litres and $V_2 = 3$ litres separated by a partition made of a thermal insulator. The chambers contain $n_1 = 5$ and $n_2 = 4$ moles of ideal gas at pressures $p_1 = 1$ atm and $p_2 = 2$ atm, respectively. When the partition is removed, the mixture attains an equilibrium pressure of

- (1) 1.8 atm (2) 1.3 atm
(3) 1.6 atm (4) 1.4 atm

Answer (3)

Sol. $P_1V_1 + P_2V_2 = P(V_1 + V_2)$

$$1(2) + 2(3) = P(2 + 3)$$

$$\frac{8}{5} = P$$

$$\Rightarrow 1.6 \text{ atm}$$

10. The radius of Martian orbit around the Sun is about 4 times the radius of the orbit of Mercury. The Martian year is 687 Earth days. Then which of the following is the length of 1 year on Mercury?

- (1) 124 earth days (2) 88 earth days
(3) 225 earth days (4) 172 earth days

Answer (2)

Sol. Applying Kepler's 3rd law : $T^2 \propto R^3$

Radius of Martian orbit, $R' = 4R$

$$\left(\frac{T'}{T}\right)^2 = \left(\frac{R'}{R}\right)^3 = \left(\frac{4R}{R}\right)^3 = 4^3 = 64 \Rightarrow \frac{T'}{T} = 8$$

$$\therefore \text{Length of 1 year on Mercury} = T = \frac{T'}{8} = \frac{687}{8} = 85.88 \text{ days}$$

11. To an ac power supply of 220 V at 50 Hz, a resistor of 20Ω , a capacitor of reactance 25Ω and an inductor of reactance 45Ω are connected in series. The corresponding current in the circuit and the phase angle between the current and the voltage is, respectively

- (1) 15.6 A and 45° (2) 7.8 A and 30°
(3) 7.8 A and 45° (4) 15.6 A and 30°

Answer (3)

Sol. $X_L = 45 \Omega$, $X_C = 25 \Omega$, $R = 20 \Omega$

$$I = \frac{220}{\sqrt{(X_L - X_C)^2 + R^2}} = \frac{220}{\sqrt{(45 - 25)^2 + 20^2}}$$

$$= \frac{220}{2\sqrt{2}} = \frac{11}{\sqrt{2}} = 7.779 \text{ A}$$

$$\tan \phi = \frac{X_L - X_C}{R} = \frac{45 - 25}{20} = 1$$

$$\phi = 45^\circ$$

12. A wire of resistance R is cut into 8 equal pieces. From these pieces two equivalent resistances are made by adding four of these together in parallel. Then these two sets are added in series. The net effective resistance of the combination is:

- (1) $\frac{R}{8}$ (2) $\frac{R}{64}$
(3) $\frac{R}{32}$ (4) $\frac{R}{16}$

Answer (4)

Sol. After being cut into 8 equal pieces,

$$\Rightarrow \text{Resistance of each piece} = R' = \frac{R}{8}$$

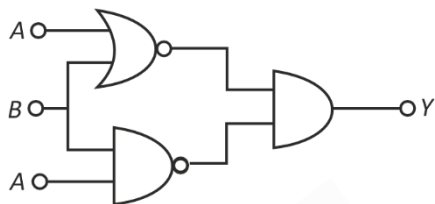
Each set has 4 pieces in parallel combination

$$\Rightarrow \text{Resistance of each set} = R'' = \frac{R'}{4} = \frac{R}{32}$$

Both sets are connected in series

$$\therefore R_{\text{eq}} = R'' + R'' = 2 \times \frac{R}{32} = \frac{R}{16}$$

13. The output (Y) of the given logic implementation is similar to the output of an/a _____ gate.



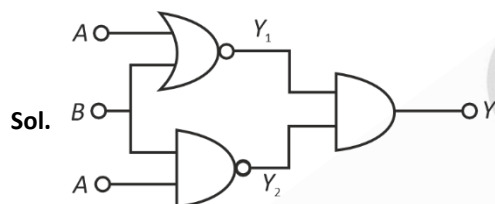
(1) NOR

(2) AND

(3) NAND

(4) OR

Answer (1)



$$Y_1 = \overline{A + B}$$

$$Y_2 = \overline{A \cdot B}$$

$$Y = Y_1 \cdot Y_2$$

$$= \overline{A + B} \cdot \overline{A \cdot B}$$

$$= \overline{(A + B) + A \cdot B}$$

$$= \overline{A + B(1 + A)}$$

$$= \overline{A + B} \text{ NOR gate}$$

14. Two identical charged conducting spheres A and B have their centres separated by a certain distance. Charge on each sphere is q and the force of repulsion between them is F . A third identical uncharged conducting sphere is brought in contact with sphere A first and then with B and finally removed from both. New force of repulsion between spheres A and B (Radii of A and B are negligible compared to the distance of separation so that for calculating force between them they can be considered as point charges) is best given as:

(1) $\frac{3F}{8}$

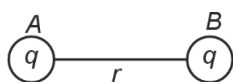
(2) $\frac{3F}{5}$

(3) $\frac{2F}{3}$


(4) $\frac{F}{2}$

Answer (1)

Sol.



$$F = \frac{Kqq}{r^2}$$



$$F' = \frac{Kq \frac{3q}{4}}{r^2}$$

$$F' = \frac{3F}{8}$$

15. Consider the diameter of a spherical object being measured with the help of a Vernier callipers. Suppose its 10 Vernier Scale Divisions (V.S.D.) are equal to its 9 Main Scale Divisions (M.S.D.). The least division in the M.S. is 0.1 cm and the zero of V.S. is at $x = 0.1$ cm when the jaws of Vernier callipers are closed.
If the main scale reading for the diameter is $M = 5$ cm and the number of coinciding vernier division is 8, the measured diameter after zero error correction, is

- (1) 5.00 cm (2) 5.18 cm
(3) 5.08 cm (4) 4.98 cm

Answer (4)

Sol. Least count = $1\text{MSD} - 1\text{VSD}$

$$= 1\text{MSD} - \frac{9}{10}\text{MSD} = \frac{1}{10}\text{MSD}$$

$$= \frac{1}{10} \times 0.1 \text{ cm} = 0.01 \text{ cm}$$

Zero error = +0.1 cm

Main scale reading = 5 cm

Vernier scale reading = $8 \times 0.01 = 0.08$ cm

Final measurement of diameter

$$= 5 + 0.08 - 0.1 = 4.98 \text{ cm}$$

16. In some appropriate units, time (t) and position (x) relation of a moving particle is given by $t = x^2 + x$. The acceleration of the particle is

- (1) $+\frac{2}{2x+1}$ (2) $-\frac{2}{(x+2)^3}$
(3) $-\frac{2}{(2x+1)^3}$ (4) $+\frac{2}{(x+1)^3}$

Answer (3)

Sol. $t = x^2 + x$

$$\frac{dt}{dx} = 2x + 1$$

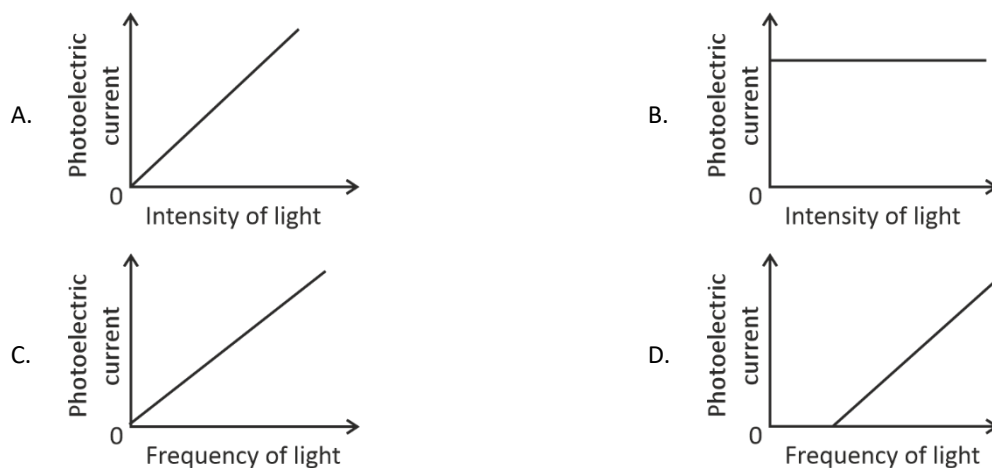
$$v = \frac{dx}{dt} = \frac{1}{(2x+1)}$$

$$\frac{dv}{dx} = \frac{-2}{(2x+1)^2}$$

$$a = v \frac{dv}{dx} = \frac{1}{(2x+1)} \left[\frac{-2}{(2x+1)^2} \right]$$

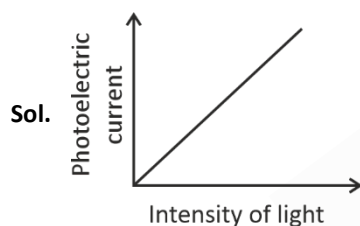
$$= -\frac{2}{(2x+1)^3}$$

17. Which of the following options represent the variation of photoelectric current with property of light shown on the x-axis?



- (1) B and D
(2) A only
(3) A and C
(4) A and D

Answer (2)



Photoelectric current is directly proportional to intensity of light.

18. A particle of mass m is moving around the origin with a constant force F pulling it towards the origin. If Bohr model is used to describe its motion, the radius of the n^{th} orbit and the particle's speed v in the orbit depend on n as
- (1) $r \propto n^{4/3}$; $v \propto n^{-1/3}$
(2) $r \propto n^{1/3}$; $v \propto n^{1/3}$
(3) $r \propto n^{1/3}$; $v \propto n^{2/3}$
(4) $r \propto n^{2/3}$; $v \propto n^{1/3}$

Answer (4)

Sol. Given, force is constant

$$F = \frac{mv^2}{r}$$

$$\Rightarrow \frac{v^2}{r} = \text{constant}$$

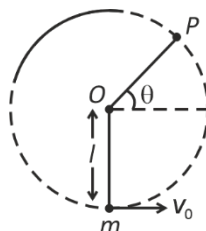
$$\Rightarrow r \propto v^2 \quad \dots(1)$$

$$\& \quad L = mvr = \frac{nh}{2\pi} \quad \dots(2)$$

\Rightarrow on solving equation (1) and equation (2)

$$v \propto n^{1/3} \text{ and } r \propto n^{2/3}$$

19. A bob of heavy mass m is suspended by a light string of length l . The bob is given a horizontal velocity v_0 as shown in figure. If the string gets slack at some point P making an angle θ from the horizontal, the ratio of the speed v of the bob at point P to its initial speed v_0 is:



(1) $\left(\frac{\sin \theta}{2 + 3 \sin \theta} \right)^{\frac{1}{2}}$

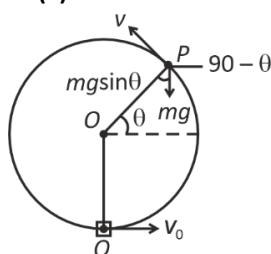
(2) $(\sin \theta)^{\frac{1}{2}}$

(3) $\left(\frac{1}{2 + 3 \sin \theta} \right)^{\frac{1}{2}}$

(4) $\left(\frac{\cos \theta}{2 + 3 \sin \theta} \right)^{\frac{1}{2}}$

Answer (1)

Sol.



At Point P , $mg \sin \theta = \frac{mv^2}{l}$... (1)

By conservation of mechanical energy at point $P \in Q$

$$\frac{1}{2}mv_0^2 = \frac{1}{2}mv^2 + mg(l + l \sin \theta)$$

$$\frac{v_0^2}{2} = \frac{v^2}{2} + gl(1 + \sin \theta)$$

Put $gl = \frac{v^2}{\sin \theta}$ using (1)

$$\frac{v_0^2}{2} = \frac{v^2}{2} + \frac{v^2}{\sin \theta}(1 + \sin \theta)$$

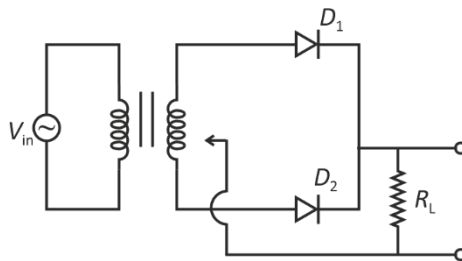
$$\frac{v_0^2}{2} = \frac{v^2}{2} + \frac{v^2}{\sin \theta} + v^2$$

$$\frac{v_0^2}{2} = \frac{3}{2}v^2 + \frac{2v^2}{2 \sin \theta}$$

$$v_0^2 = v^2 \left[3 + \frac{2}{\sin \theta} \right]$$

$$\frac{v}{v_0} = \left(\frac{\sin \theta}{3 \sin \theta + 2} \right)^{\frac{1}{2}}$$

20. A full wave rectifier circuit with diodes (D_1) and (D_2) is shown in the figure. If input supply voltage $V_{in} = 220\sin(100\pi t)$ volt, then at $t = 15$ msec



- (1) D_1 and D_2 both are reverse biased
 (2) D_1 is forward biased, D_2 is reverse biased
 (3) D_1 is reverse biased, D_2 is forward biased.
 (4) D_1 and D_2 both are forward biased

Answer (3)

Sol. $V_{in} = 220\sin(100\pi t)$ volt

$$t = 15 \text{ ms}$$

$$t = 0.015 \text{ s}$$

$$\omega = 100\pi$$

$$\frac{2\pi}{T} = 100\pi$$

$$T = \frac{1}{50} \text{ s}$$

$$T = 0.02 \text{ s}$$

$$\therefore t = \frac{3T}{4}$$

i.e. negative half cycle.

So now negative half cycle is fed to circuit making D_1 as reverse biased and D_2 as forward biased.

21. A balloon is made of a material of surface tension S and its inflation outlet (from where gas is filled in it) has small area A . It is filled with a gas of density ρ and takes a spherical shape of radius R . When the gas is allowed to flow freely out of it, its radius r changes from R to 0 (zero) in time T . If the speed $v(r)$ of gas coming out of the balloon depends on r as r^a and $T \propto S^\alpha A^\beta \rho^\gamma R^\delta$ then

- (1) $a = \frac{1}{2}, \alpha = \frac{1}{2}, \beta = -\frac{1}{2}, \gamma = \frac{1}{2}, \delta = \frac{7}{2}$
 (2) $a = \frac{1}{2}, \alpha = \frac{1}{2}, \beta = -1, \gamma = +1, \delta = \frac{3}{2}$
 (3) $a = -\frac{1}{2}, \alpha = -\frac{1}{2}, \beta = -1, \gamma = -\frac{1}{2}, \delta = \frac{5}{2}$
 (4) $a = -\frac{1}{2}, \alpha = -\frac{1}{2}, \beta = -1, \gamma = \frac{1}{2}, \delta = \frac{7}{2}$

Answer (4)

Sol. $T \propto S^\alpha A^\beta \rho^\gamma R^\delta$

$$M^0 L^0 T^1 = K(MT^{-2})^\alpha (L^2)^\beta (ML^{-3})^\gamma L^\delta$$

$$M^0 L^0 T^1 = K[M^{\alpha+\gamma} L^{2\beta-3\gamma+\delta} T^{-2\alpha}]$$

$$-2\alpha = 1 \quad \alpha = -\frac{1}{2}$$

$$\alpha + \gamma = 0 \quad \gamma = \frac{1}{2}$$

$$2\beta - 3\gamma + \delta = 0$$

$$2\beta - 3\left(\frac{1}{2}\right) + \delta = 0$$

By hit and trial (using option (1))

Put $\beta = -1$

$$2(-1) - \frac{3}{2} + \delta = 0 \quad \therefore \delta = \frac{7}{2}$$

22. A microscope has an objective of focal length 2 cm, eyepiece of focal length 4 cm and the tube length of 40 cm. If the distance of distinct vision of eye is 25 cm, the magnification in the microscope is

- (1) 250 (2) 100
(3) 125 (4) 150

Answer (3)

Sol.
$$m = \frac{L}{f_o} \times \frac{D}{f_e}$$
$$= \frac{40}{2} \times \frac{25}{4}$$
$$m = 125$$

23. Two identical point masses P and Q , suspended from two separate massless springs of spring constants k_1 and k_2 , respectively, oscillate vertically. If their maximum speeds are the same, the ratio (A_Q/A_P) of the amplitude A_Q of mass Q to the amplitude A_P of mass P is

- (1) $\sqrt{\frac{k_1}{k_2}}$ (2) $\frac{k_2}{k_1}$
(3) $\frac{k_1}{k_2}$ (4) $\sqrt{\frac{k_2}{k_1}}$

Answer (1)

Sol. Maximum velocity $V = A\omega$

$$V_P = V_Q$$

$$A_P\omega_P = A_Q\omega_Q$$

$$\frac{A_Q}{A_P} = \frac{\omega_P}{\omega_Q} \quad \left(\omega = \sqrt{\frac{k}{m}} \right)$$

$$= \sqrt{\frac{k_P}{m_P} \frac{m_Q}{k_Q}}$$

$$= \sqrt{\frac{k_1}{k_2}}$$

24. A parallel plate capacitor made of circular plates is being charged such that the surface charge density on its plates is increasing at a constant rate with time. The magnetic field arising due to displacement current is:

- (1) Zero between the plates and non-zero outside
(2) Zero at all places
(3) Constant between the plates and zero outside the plates
(4) Non-zero everywhere with maximum at the imaginary cylindrical surface connecting peripheries of the plates

Answer (4)

Sol. Let the surface charge density be $\sigma = \frac{q}{A}$

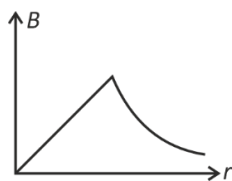
Given $\frac{d\sigma}{dt} = \text{constant}$

$$\therefore \frac{d}{dt} \left(\frac{q}{A} \right) = \text{constant} \Rightarrow \frac{I}{A} = \text{constant}$$

It means displacement current is constant.

This system will act like a cylindrical wire.

The graph of magnetic field (B) vs r is



25. An electric dipole with dipole moment $5 \times 10^{-6} \text{ C m}$ is aligned with the direction of a uniform electric field of magnitude $4 \times 10^5 \text{ N/C}$. The dipole is then rotated through an angle of 60° with respect to the electric field. The change in the potential energy of the dipole is:

- (1) 1.5 J (2) 0.8 J
(3) 1.0 J (4) 1.2 J

Answer (3)

Sol. Given

$$|\vec{P}| = 5 \times 10^{-6} \text{ C m}$$

$$|\vec{E}| = 4 \times 10^5 \text{ N/C}$$

$$\theta_i = 0^\circ \text{ and } \theta_f = 60^\circ$$

$$\Delta U = U_f - U_i$$

$$= -PE \cos \theta_f + PE \cos \theta_i$$

$$= PE [\cos \theta_i - \cos \theta_f]$$

$$= 5 \times 10^{-6} \times 4 \times 10^5 \left[1 - \frac{1}{2} \right]$$

$$= 10 \times 10^{-6} \times 10^5 = 1 \text{ J}$$

26. There are two inclined surfaces of equal length (L) and same angle of inclination 45° with the horizontal. One of them is rough and the other is perfectly smooth. A given body takes 2 times as much time to slide down on rough surface than on the smooth surface. The coefficient of kinetic friction (μ_k) between the object and the rough surface is close to

- (1) 0.75 (2) 0.25
(3) 0.40 (4) 0.5

Answer (1)

Sol. $t_{\text{rough}} = 2t_{\text{smooth}}$

$$a_{\text{smooth}} = g \sin \theta$$

$$t \propto \frac{1}{\sqrt{a}} \Rightarrow t_{\text{smooth}} \propto \frac{1}{\sqrt{g \sin \theta}}$$

$$a_{\text{rough}} = g \sin \theta - \mu_k g \cos \theta$$

$$\frac{t_{\text{rough}}}{t_{\text{smooth}}} = \frac{\sqrt{\sin \theta}}{\sqrt{\sin \theta - \mu_k \cos \theta}} = 2$$

Squaring both sides

$$\frac{\sin \theta}{\sin \theta - \mu_k \cos \theta} = 4 \Rightarrow \frac{\frac{1}{\sqrt{2}}}{\frac{1}{\sqrt{2}} - \mu_k \times \frac{1}{\sqrt{2}}} = 4$$

$$\Rightarrow 1 - \mu_k = \frac{1}{4}$$

$$\mu_k = \frac{3}{4}$$

$$= 0.75$$

27. De-Broglie wavelength of an electron orbiting in the $n = 2$ state of hydrogen atom is close to
(Given Bohr radius = 0.052 nm)
- (1) 2.67 nm (2) 0.067 nm
(3) 0.67 nm (4) 1.67 nm

Answer (3)

Sol. $r = 0.052 n^2$

For $n = 2$

$$r = 0.052 \times 4$$

$$= 0.208 \text{ nm}$$

$$Mvr = \frac{nh}{2\pi}$$

$$\lambda = \frac{h}{Mv} = \pi r$$

$$= 3.14 \times 0.208 \text{ nm}$$

$$= 0.65317 \text{ nm}$$

$$\approx 0.67 \text{ nm}$$

28. The Sun rotates around its centre once in 27 days. What will be the period of revolution if the Sun were to expand to twice its present radius without any external influence? Assume the Sun to be a sphere of uniform density.
- (1) 108 days (2) 100 days
(3) 105 days (4) 115 days

Answer (1)

Sol. Assuming the Sun to be a solid sphere, $I = \frac{2}{5}mR^2$

Using conservation of angular momentum, $I'\omega' = I\omega$

$$\Rightarrow \frac{2}{5}m(2R)^2 \times \frac{2\pi}{T'} = \frac{2}{5}mR^2 \times \frac{2\pi}{T}$$

$$\Rightarrow T' = 4T = 4 \times 27 = 108 \text{ days}$$

29. A physical quantity P is related to four observations a , b , c and d as follows:

$$P = a^3 b^2 / c \sqrt{d}$$

The percentage errors of measurement in a , b , c and d are 1%, 3%, 2%, and 4% respectively. The percentage error in the quantity P is

- (1) 15% (2) 10%
(3) 2% (4) 13%

Answer (4)

Sol. Maximum % error in $P = \frac{\Delta P}{P} \times 100 = 3\left(\frac{\Delta a}{a} \times 100\right) + 2\left(\frac{\Delta b}{b} \times 100\right) + \left(\frac{\Delta c}{c} \times 100\right) + \frac{1}{2}\left(\frac{\Delta d}{d} \times 100\right)$

$$= 3 \times (1) + 2 \times (3) + (2) + \frac{1}{2} \times (4)$$

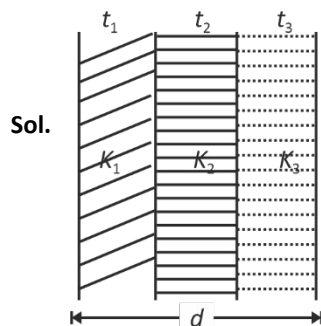
$$= 13\%$$

30. The plates of a parallel plate capacitor are separated by d . Two slabs of different dielectric constant K_1 and K_2 with thickness $\frac{3}{8}d$ and $\frac{d}{2}$, respectively are inserted in the capacitor. Due to this, the capacitance becomes two times larger than when there is nothing between the plates.

If $K_1 = 1.25 K_2$, the value of K_1 is:

- (1) 1.33 (2) 2.66
(3) 2.33 (4) 1.60

Answer (2)



$$\text{Using } C_{eq} = \frac{\epsilon_0 A}{\frac{t_1}{K_1} + \frac{t_2}{K_2} + \frac{t_3}{K_3}}$$

$$\text{here } C_0 = \frac{\epsilon_0 A}{d}, t_1 = \frac{3d}{8}, t_2 = \frac{d}{2}, t_3 = \frac{d}{8}$$

$$K_1 = K_1, K_2 = \frac{K_1}{1.25} \text{ and } K_3 = 1$$

$$\text{Given } C_{eq} = 2C_0$$

$$\Rightarrow 2C_0 = \frac{\epsilon_0 A}{\frac{3d}{8K_1} + \frac{d \times 1.25}{2K_1} + \frac{d}{8}}$$

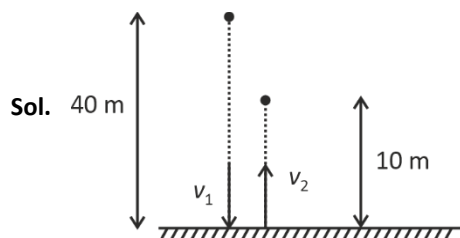
$$\Rightarrow \frac{2\epsilon_0 A}{d} = \frac{\epsilon_0 A}{\frac{3d}{8K_1} + \frac{d}{2K_1} \times \frac{5}{4} + \frac{d}{8}}$$

$$\Rightarrow 2 = \frac{1}{\frac{3}{8K_1} + \frac{5}{8K_1} + \frac{1}{8}} \Rightarrow K_1 = \frac{8}{3} = 2.66$$

31. A ball of mass 0.5 kg is dropped from a height of 40 m. The ball hits the ground and rises to a height of 10 m. The impulse imparted to the ball during its collision with the ground is (Take $g = 9.8 \text{ m/s}^2$)

- (1) 84 NS (2) 21 NS
(3) 7 NS (4) 0

Answer (2)



$$v_1 = \sqrt{2gh_1}$$

$$= \sqrt{2 \times 9.8 \times 40}$$

$$v_1 = \sqrt{784} = 28 \text{ m s}^{-1}$$

$$\text{and } v_2 = \sqrt{2gh_2} = \sqrt{2 \times 9.8 \times 10}$$

$$= \sqrt{196} = 14 \text{ m s}^{-1}$$

$$\text{Impulse} = \Delta \vec{p} = m(\vec{v}_f - \vec{v}_i) = m(\vec{v}_2 - \vec{v}_1)$$

$$= \frac{1}{2}(14 - (-28))$$

$$= 21 \text{ NS}$$

32. Two cities X and Y are connected by a regular bus service with a bus leaving in either direction every T min. A girl is driving scooter with a speed of 60 km/h in the direction X to Y notices that a bus goes past her every 30 minutes in the direction of her motion, and every 10 minutes in the opposite direction. Choose the correct option for the period T of the bus service and the speed (assumed constant) of the buses.

(1) 15 min, 120 km/h

(2) 9 min, 40 km/h

(3) 25 min, 100 km/h

(4) 10 min, 90 km/h

Answer (1)



$X \rightarrow Y$

Let velocity of bus = v km/hr

Relative velocity of bus w.r.t. scooter = $(v - 60)$

Distance between 2 consecutive buses = vT

$$(v - 60)30 = vT \quad \dots(i)$$

$Y \rightarrow X$

$$(v + 60)10 = vT \quad \dots(ii)$$

Equating (1) and (2)

$$(v - 60)30 = (v + 60)10$$

$$\therefore v = 120 \text{ km/hr}$$

$$T = 15 \text{ min}$$

33. An oxygen cylinder of volume 30 litre has 18.20 moles of oxygen. After some oxygen is withdrawn from the cylinder, its gauge pressure drops to 11 atmospheric pressures at temperature 27°C . The mass of the oxygen withdrawn from the cylinder is nearly equal to:

[Given, $R = \frac{100}{12} \text{ J mol}^{-1} \text{ K}^{-1}$, and molecular mass of $\text{O}_2 = 32$, 1 atm pressure = $1.01 \times 10^5 \text{ N/m}^2$]

(1) 0.156 kg

(2) 0.125 kg

(3) 0.144 kg

(4) 0.116 kg

Answer (4)

Sol. Number of moles left

$$n = \frac{PV}{RT} = \frac{12 \times 1.01 \times 10^5 \text{ N/m}^2 \times 30 \times 10^{-3} \text{ m}^3}{\frac{100}{12} \times 300}$$

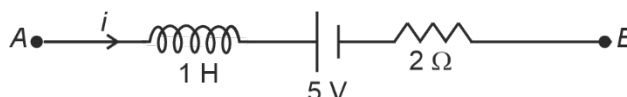
$$n = \frac{12 \times 1.01 \times 12}{10} = 14.54 \text{ moles}$$

$$\text{Moles removed} = 18.2 - 14.54$$

$$= 3.656 \text{ moles}$$

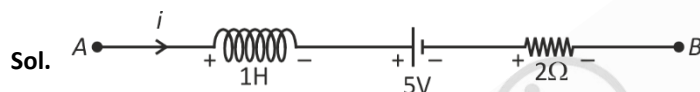
$$\text{Mass removed} = 3.656 \times 32 = 116.99 \text{ g} = 0.116 \text{ kg}$$

34. AB is a part of an electrical circuit (see figure). The potential difference " $V_A - V_B$ ", at the instant when current $i = 2 \text{ A}$ and is increasing at a rate of 1 amp/second is:



- (1) 10 volt (2) 5 volt
(3) 6 volt (4) 9 volt

Answer (1)



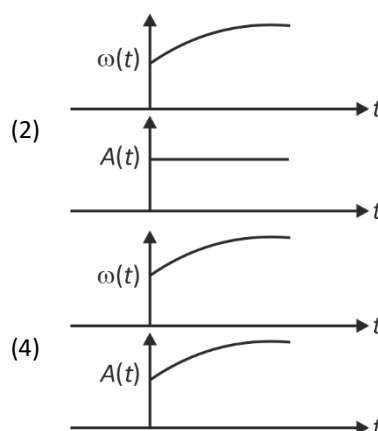
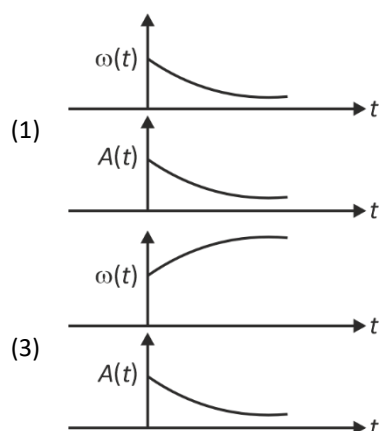
Given, $i = 2 \text{ A}$ and $\frac{di}{dt} = +1 \text{ A/s}$

$$V_A - L \frac{di}{dt} - 5 - i \times 2 = V_B$$

$$\Rightarrow V_A - 1 \times 1 - 5 - 2 \times 2 = V_B$$

$$\Rightarrow V_A - V_B = 10 \text{ volt}$$

35. In an oscillating spring mass system, a spring is connected to a box filled with sand. As the box oscillates, sand leaks slowly out of the box vertically so that the average frequency $\omega(t)$ and average amplitude $A(t)$ of the system change with time t . Which one of the following options schematically depicts these changes correctly?



Answer (3)

Sol. At any point of time, time period is given by

$$T = 2\pi \sqrt{\frac{m}{k}}$$

Here m is decreasing, so time period T will be decreasing

Since $\omega = \frac{2\pi}{T}$

Hence as mass leaks, ω will increase

Now, at any instant

$$mg = kx_0$$

So, equilibrium length $x_0 = \frac{mg}{k}$, where m is decreasing

So, equilibrium length will decrease.

So, amplitude also go on decreasing.

36. A model for quantized motion of an electron in a uniform magnetic field B states that the flux passing through the orbit of the electron is $n(h/e)$ where n is an integer, h is Planck's constant and e is the magnitude of electron's charge. According to the model, the magnetic moment of an electron in its lowest energy state will be (m is the mass of the electron)

(1) $\frac{heB}{2\pi m}$

(2) $\frac{he}{\pi m}$

(3) $\frac{he}{2\pi m}$

(4) $\frac{heB}{\pi m}$

Answer (3)

Sol. Magnetic force = $\frac{mv^2}{r}$

$$evB = \frac{mv^2}{r}$$

$$v = \frac{eBr}{m}$$

$$\phi = BA$$

$$\frac{nh}{e} = B\pi r^2$$

$$Br^2 = \frac{nh}{e\pi}$$

$$\mu = IA$$

$$= \frac{e}{T} \pi r^2$$

$$= \frac{e \times v}{2\pi r} \pi r^2$$

$$\mu = \frac{evr}{2}$$

$$= \frac{1}{2} e \times \frac{eBr}{m} r$$

$$\mu = \frac{1}{2} e^2 \frac{Br^2}{m}$$

$$\mu = \frac{1}{2} e^2 \frac{nh}{e\pi m}$$

$$\mu = \frac{neh}{2\pi m}$$

$$\text{for } n = 1$$

$$\mu = \frac{eh}{2\pi m}$$

37. A body weighs 48 N on the surface of the earth. The gravitational force experienced by the body due to the earth at a height equal to one-third the radius of the earth from its surface is :

- (1) 36 N (2) 16 N
(3) 27 N (4) 32 N

Answer (3)

Sol. $W = mg$ and $g = \frac{GM}{R^2}$, $g_h = \frac{GM}{(R+h)^2}$

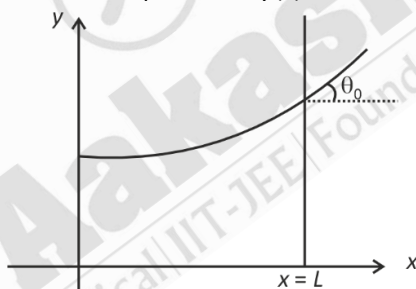
$$\Rightarrow \frac{W_h}{W} = \frac{mg_h}{mg} = \frac{g_h}{g} = \frac{R^2}{(R+h)^2} \quad \left(h = \frac{R}{3} \right)$$

$$\Rightarrow \frac{W_h}{W} = \frac{R^2}{\left(R + \frac{R}{3}\right)^2} = \frac{R^2}{\left(\frac{4R}{3}\right)^2} = \frac{9}{16}$$

$$\Rightarrow W_h = \frac{9}{16}W = \frac{9}{16} \times 48 \quad [W = 48 \text{ N}]$$

$$= 27 \text{ N}$$

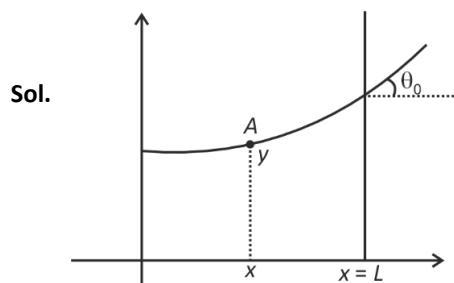
38. Consider a water tank shown in the figure. It has one wall at $x = L$ and can be taken to be very wide in the z direction. When filled with a liquid of surface tension S and density ρ , the liquid surface makes angle θ_0 ($\theta_0 \ll 1$) with the x -axis at $x = L$. If $y(x)$ is the height of the surface then the equation for $y(x)$ is:



(take $\theta(x) = \sin\theta(x) = \tan\theta(x) = \frac{dy}{dx}$, g is the acceleration due to gravity)

- (1) $\frac{dy}{dx} = \sqrt{\frac{\rho g}{S}} x$ (2) $\frac{d^2y}{dx^2} = \frac{\rho g}{S} x$
(3) $\frac{d^2y}{dx^2} = \frac{\rho g}{S} y$ (4) $\frac{d^2y}{dx^2} = \sqrt{\frac{\rho g}{S}}$

Answer (3)



ROC = Radius of curvature at point A

$$\text{Curvature} = \frac{1}{ROC} = \frac{\left| \frac{d^2y}{dx^2} \right|}{\left(1 + \left(\frac{dy}{dx} \right)^2 \right)^{\frac{3}{2}}} = \frac{\left| \frac{d^2y}{dx^2} \right|}{(1+0)^{\frac{3}{2}}} = \frac{d^2y}{dx^2} \quad \left[\because \frac{dy}{dx} = \tan\theta \approx 0 \right]$$

$$\Delta P = S \times \text{curvature}$$

$$\Rightarrow \rho g y = S \frac{d^2y}{dx^2}$$

$$\therefore \frac{d^2y}{dx^2} = \frac{\rho g y}{S}$$

39. The intensity of transmitted light when a polaroid sheet, placed between two crossed polaroids at 22.5° from the polarization axis of one of the polaroids, is (I_0 is the intensity of polarised light after passing through the first polaroid):

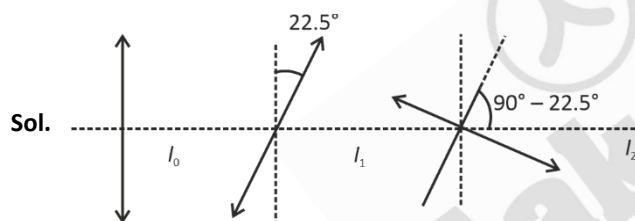
(1) $\frac{I_0}{16}$

(2) $\frac{I_0}{2}$

(3) $\frac{I_0}{4}$

(4) $\frac{I_0}{8}$

Answer (4)



$$I_1 = I_0 \cos^2 \left(\frac{45}{2} \right)$$

$$I_2 = I_1 \cos^2 \left(90 - \frac{45}{2} \right)$$

$$= I_0 \cos^2 \left(\frac{45}{2} \right) \sin^2 \left(\frac{45}{2} \right)$$

$$= \frac{I_0}{4} \left(4 \cos^2 \left(\frac{45}{2} \right) \sin^2 \left(\frac{45}{2} \right) \right)$$

$$= \frac{I_0}{4} \sin^2 45^\circ = \frac{I_0}{8}$$

40. A photon and an electron (mass m) have the same energy E . The ratio ($\lambda_{\text{photon}}/\lambda_{\text{electron}}$) of their de Broglie wavelengths is: (c is the speed of light)

(1) $\frac{1}{c} \sqrt{\frac{E}{2m}}$

(2) $\sqrt{\frac{E}{2m}}$

(3) $c\sqrt{2mE}$

(4) $c\sqrt{\frac{2m}{E}}$

Answer (4)

Sol. For photon, $E = \frac{hc}{\lambda_{ph}} \Rightarrow \lambda_{ph} = \frac{hc}{E}$

For electron, $p = \text{momentum}$ and $E = \frac{p^2}{2m} = \left(\frac{h}{\lambda_e}\right)^2 \times \frac{1}{2m}$

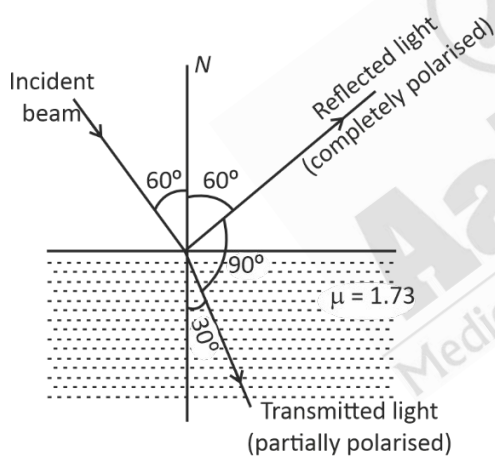
$$\Rightarrow \lambda_e = \frac{h}{\sqrt{2mE}}$$

$$\therefore \frac{\lambda_{ph}}{\lambda_e} = \frac{\frac{hc}{E}}{\frac{h}{\sqrt{2mE}}} = c\sqrt{\frac{2m}{E}}$$

41. An unpolarized light beam travelling in air is incident on a medium of refractive index 1.73 at Brewster's angle. Then
- (1) Transmitted light is completely polarized with angle of refraction close to 30°
 - (2) Reflected light is completely polarized and the angle of reflection is close to 60°
 - (3) Reflected light is partially polarized and the angle of reflection is close to 30°
 - (4) Both reflected and transmitted light are perfectly polarized with angles of reflection and refraction close to 60° and 30° , respectively

Answer (2)

Sol. Using Brewster law



$$\mu = \tan \theta_p$$

$$\Rightarrow 1.73 = \tan \theta_p$$

$$\Rightarrow \sqrt{3} = \tan \theta_p$$

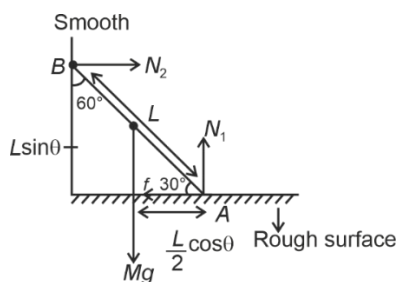
$$\Rightarrow \theta_p = 60^\circ$$

At this polarising angle, reflected light is perfectly polarized and transmitted light is partially polarised.

42. A uniform rod of mass 20 kg and length 5 m leans against a smooth vertical wall making an angle of 60° with it. The other end rests on a rough horizontal floor. The friction force that the floor exerts on the rod is (Take $g = 10 \text{ m/s}^2$)
- (1) $200\sqrt{3} \text{ N}$
 - (2) 100 N
 - (3) $100\sqrt{3} \text{ N}$
 - (4) 200 N

Answer (3)

Sol.



For translational equilibrium

$$N_1 = Mg$$

$$N_2 = f$$

For rotational equilibrium

$$\text{Torque about A, } Mg \frac{L}{2} \cos \theta = N_2 L \sin \theta$$

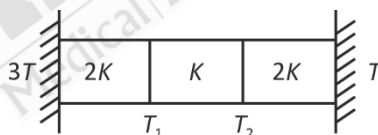
$$\frac{Mg}{2} \cot \theta = N_2 = f$$

$$\frac{Mg}{2} \cot 30^\circ = f$$

$$\frac{Mg}{2} \sqrt{3} = N_2$$

$$100\sqrt{3} = f$$

43. Three identical heat conducting rods are connected in series as shown in the figure. The rods on the sides have thermal conductivity $2K$ while that in the middle has thermal conductivity K . The left end of the combination is maintained at temperature $3T$ and the right end at T . The rods are thermally insulated from outside. In steady state, temperature at the left junction is T_1 and that at the right junction is T_2 . The ratio T_1/T_2 is



(1) $\frac{5}{4}$

(2) $\frac{3}{2}$

(3) $\frac{4}{3}$

(4) $\frac{5}{3}$

Answer (4)

Sol. In series, $R_{eq.} = R_1 + R_2 + R_3$

$$= \frac{l}{2KA} + \frac{l}{KA} + \frac{l}{2KA}$$

$$= \frac{4l}{2KA}$$

$$R_{eq.} = \frac{2l}{KA}$$

In series rate of heat flow is same

$$\therefore \frac{3T - T_1}{R_1} = \frac{3T - T}{R_{eq}}$$

$$\frac{(3T - T_1)2KA}{l} = \frac{(2T)KA}{2l}$$

$$\Rightarrow 6T - 2T_1 = T$$

$$\Rightarrow 2T_1 = 5T$$

$$\Rightarrow T_1 = \frac{5T}{2} \dots(1)$$

Now, equate heat flow rate in 3rd section & total section

$$\frac{T_2 - T}{R_3} = \frac{3T - T}{R_{eq}}$$

$$\Rightarrow \frac{(T_2 - T)(2KA)}{l} = \frac{2T(KA)}{2l}$$

$$\Rightarrow 2T_2 - 2T = T$$

$$\Rightarrow T_2 = \frac{3T}{2} \dots(2)$$

By equation (1) and equation (2)

$$\frac{T_1}{T_2} = \frac{5T \times 2}{2 \times 3T} = \frac{5}{3}$$

44. The kinetic energies of two similar cars A and B are 100 J and 225 J respectively. On applying breaks, car A stops after 1000 m and car B stops after 1500 m. If F_A and F_B are the forces applied by the breaks on cars A and B respectively, then the ratio of $\frac{F_A}{F_B}$ is

(1) $\frac{1}{2}$

(2) $\frac{3}{2}$

(3) $\frac{2}{3}$

(4) $\frac{1}{3}$

Answer (3)

Sol. By work-energy theorem,

$$FS = \Delta K \cdot E$$

$$\Rightarrow -FS = k_f - k_i$$

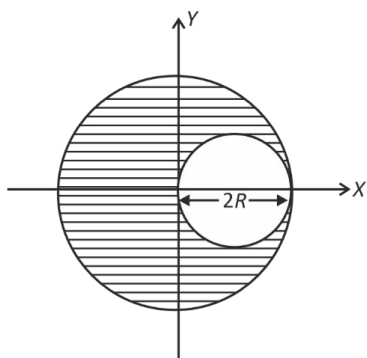
$$\Rightarrow FS = k_i - k_f$$

$$\Rightarrow \frac{F_A}{F_B} = \frac{k_A}{k_B} \times \frac{S_B}{S_A}$$

$$= \frac{100}{225} \times \frac{1500}{1000}$$

$$= \frac{150}{225} = \frac{2}{3}$$

45. A sphere of radius R is cut from a larger solid sphere of radius $2R$ as shown in the figure. The ratio of the moment of inertia of the smaller sphere to that of the rest part of the sphere about the Y-axis is:



(1) $\frac{7}{64}$

(2) $\frac{7}{8}$

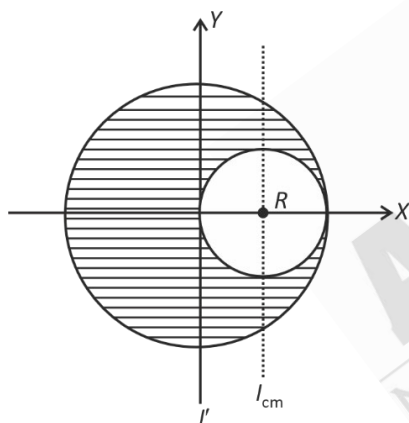
(3) $\frac{7}{40}$

(4) $\frac{7}{57}$

Answer (4)

Sol. For larger solid sphere about diameter Y-axis,

$$I_{\text{whole}} = \frac{2}{5} M (2R)^2 = \frac{8}{5} MR^2$$



Density of sphere is uniform

$$\Rightarrow \frac{M}{V_{\text{whole}}} = \frac{M_{\text{smaller}}}{V_{\text{smaller}}} \Rightarrow \frac{M}{\frac{4}{3}\pi(2R)^3} = \frac{M'}{\frac{4}{3}\pi R^3}$$

$$\Rightarrow M' = \frac{M}{8}$$

Using parallel axis theorem for smaller sphere,

$$I' = I_{\text{cm}} + M'R^2 = \frac{2}{5} \frac{MR^2}{8} + \frac{MR^2}{8} = \frac{7}{40} MR^2$$

$$\therefore \text{Ratio} = \frac{I_{\text{smaller}}}{I_{\text{remaining}}} = \frac{I'}{I_{\text{whole}} - I'} = \frac{\frac{7}{40} MR^2}{\left(\frac{8}{5} - \frac{7}{40}\right) MR^2} = \frac{7}{64 - 7} = \frac{7}{57}$$

CHEMISTRY

46. If the molar conductivity (Λ_m) of a 0.050 mol L⁻¹ solution of a monobasic weak acid is 90 S cm² mol⁻¹, its extent (degree) of dissociation will be

[Assume $\Lambda_+^\circ = 349.6$ S cm² mol⁻¹ and $\Lambda_-^\circ = 50.4$ S cm² mol⁻¹.]

- (1) 0.215 (2) 0.115
(3) 0.125 (4) 0.225

Answer (4)

Sol. Degree of dissociation (α) is given as

$$\alpha = \frac{\Lambda_m}{\Lambda_m^\circ}$$

$$\Lambda_m^\circ = \Lambda_+^\circ + \Lambda_-^\circ$$

$$= 349.6 + 50.4$$

$$= 400 \text{ S cm}^2 \text{ mol}^{-1}$$

$$\alpha = \frac{\Lambda_m}{\Lambda_m^\circ} = \frac{90}{400} = 0.225$$

47. Given below are two statements :

Statement I : A hypothetical diatomic molecule with bond order zero is quite stable.

Statement II : As bond order increases, the bond length increases.

In the light of the above statements, choose the **most appropriate** answer from the options given below :

- (1) Statement I is false but Statement II is true
(2) Both Statement I and Statement II are true
(3) Both Statement I and Statement II are false
(4) Statement I is true but Statement II is false

Answer (3)

Sol. • A positive bond order means a stable molecule while a negative or zero bond order means an unstable molecule.
• When bond order increases, the bond length decreases.

48. The ratio of the wavelengths of the light absorbed by a Hydrogen atom when it undergoes $n = 2 \rightarrow n = 3$ and $n = 4 \rightarrow n = 6$ transitions, respectively, is

- (1) $\frac{1}{4}$ (2) $\frac{1}{36}$
(3) $\frac{1}{16}$ (4) $\frac{1}{9}$

Answer (1)

Sol. $\Delta E = \frac{hc}{\lambda} = E_{\text{final}} - E_{\text{initial}} \quad \left(E_n = \frac{-R_H}{n^2} \right)$

$$\begin{aligned}\Delta E_{2 \rightarrow 3} &= \frac{hc}{\lambda_{2 \rightarrow 3}} = E_3 - E_2 = \frac{-R_H}{3^2} - \left(\frac{-R_H}{2^2} \right) \\ &= R_H \left(\frac{1}{4} - \frac{1}{9} \right) \\ &= R_H \times \frac{5}{36}\end{aligned}$$

$$\therefore \lambda_{2 \rightarrow 3} = \frac{hc \cdot 36}{R_H \cdot 5}$$

$$\Delta E_{4 \rightarrow 6} = E_6 - E_4 = \frac{-R_H}{36} + \frac{R_H}{16} = \frac{R_H \times 20}{36 \times 16}$$

$$\frac{hc}{\lambda_{4 \rightarrow 6}} = \frac{R_H \times 20}{36 \times 16}$$

$$\lambda_{4 \rightarrow 6} = \frac{hc \times 36 \times 16}{R_H \cdot 20}$$

$$\frac{\lambda_{2 \rightarrow 3}}{\lambda_{4 \rightarrow 6}} = \frac{\frac{hc \cdot 36}{R_H \cdot 5}}{\frac{hc \times 36 \times 16}{R_H \cdot 20}}$$

$$= \frac{1}{4}$$

49. The correct order of the wavelength of light absorbed by the following complexes is,

- A. $[\text{Co}(\text{NH}_3)_6]^{3+}$ B. $[\text{Co}(\text{CN})_6]^{3-}$
C. $[\text{Cu}(\text{H}_2\text{O})_4]^{2+}$ D. $[\text{Ti}(\text{H}_2\text{O})_6]^{3+}$

Choose the **correct** answer from the options given below:

- (1) $C < A < D < B$
(2) $B < D < A < C$
(3) $B < A < D < C$
(4) $C < D < A < B$

Answer (3)

Sol. $\lambda \propto \frac{1}{\text{strength of ligand}}$

$$\lambda \propto \frac{1}{\text{splitting}}$$

- A. $[\text{Co}(\text{NH}_3)_6]^{3+}$; 475 nm
B. $[\text{Co}(\text{CN})_6]^{3-}$; 310 nm
C. $[\text{Cu}(\text{H}_2\text{O})_4]^{2+}$; 600 nm
D. $[\text{Ti}(\text{H}_2\text{O})_6]^{3+}$; 498 nm

Order of $\lambda = C > D > A > B$

50. If the rate constant of a reaction is 0.03 s^{-1} , how much time does it take for 7.2 mol L^{-1} concentration of the reactant to get reduced to 0.9 mol L^{-1} ?

(Given: $\log 2 = 0.301$)

- (1) 21.0 s (2) 69.3 s
(3) 23.1 s (4) 210 s

Answer (2)

Sol. $k = 0.03 \text{ s}^{-1}$

$$\begin{aligned}
 t &= \frac{2.303}{k} \log \frac{a}{a-x} \\
 &= \frac{2.303}{0.03} \log \frac{7.2}{0.9} \\
 &= \frac{2.303}{0.03} \log 8 \\
 &= \frac{2.303}{0.03} \times 3 \times \log 2 \\
 &= \frac{2.303}{0.03} \times 3 \times 0.301 \\
 &= 69.3 \text{ s}
 \end{aligned}$$

51. Match **List I** with **List II**

	List-I (Mixture)		List-II (Method of separation)
A.	$\text{CHCl}_3 + \text{C}_6\text{H}_5\text{NH}_2$	(I)	Distillation under reduced pressure
B.	Crude oil in petroleum industry	(II)	Steam distillation
C.	Glycerol from spent-lye	(III)	Fractional distillation
D.	Aniline - water	(IV)	Simple distillation

Choose the **correct** answer from the options given below:

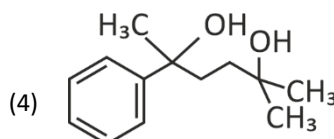
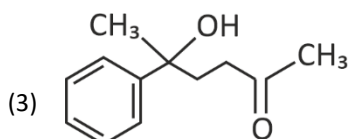
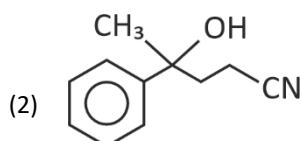
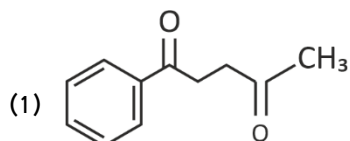
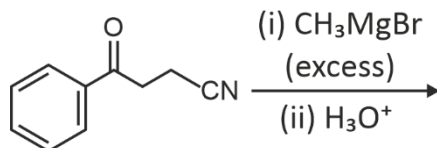
- (1) A-III, B-IV, C-II, D-I (2) A-IV, B-III, C-I, D-II
(3) A-IV, B-III, C-II, D-I (4) A-III, B-IV, C-I, D-II

Answer (2)

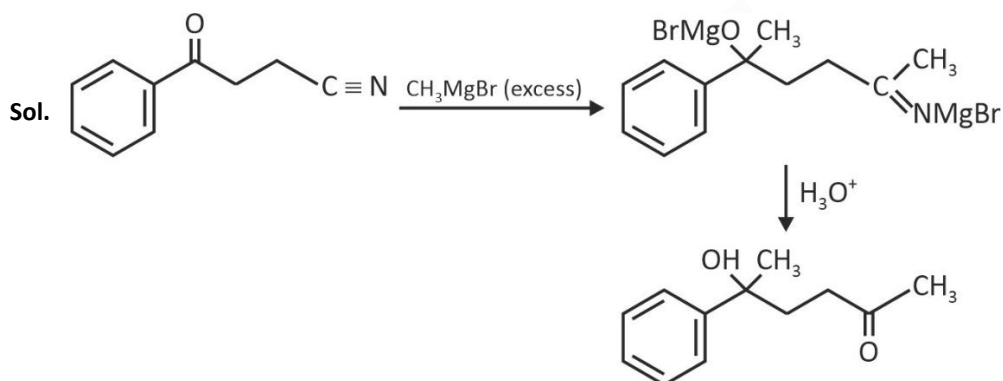
Sol.

		(Method of separation)
(A)	$\text{CHCl}_3 + \text{C}_6\text{H}_5\text{NH}_2$	Simple distillation
(B)	Crude oil in petroleum industry	Fractional distillation
(C)	Glycerol from spent-lye	Distillation under reduced pressure
(D)	Aniline - water	Steam Distillation

52. The major product of the following reaction is



Answer (3)



53. Which one of the following compounds can exist as cis-trans isomers?

(1) 1, 2-Dimethylcyclohexane

(2) Pent-1-ene

(3) 2-Methylhex-2-ene

(4) 1, 1-Dimethylcyclopropane

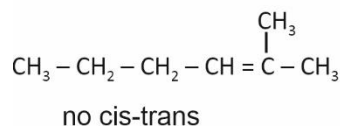
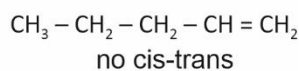
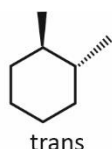
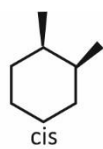
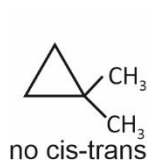
Answer (1)

Sol. Cis-trans isomers shown by :

Condition: Restricted rotation around double bond

Or

Different group around double bond



54. Among the following, choose the ones with equal number of atoms.

- A. 212 g of $\text{Na}_2\text{CO}_3(\text{s})$ [molar mass = 106 g]
 B. 248 g of $\text{Na}_2\text{O}(\text{s})$ [molar mass = 62 g]
 C. 240 g of $\text{NaOH}(\text{s})$ [molar mass = 40 g]
 D. 12 g of $\text{H}_2(\text{g})$ [molar mass = 2 g]
 E. 220 g of $\text{CO}_2(\text{g})$ [molar mass = 44 g]

Choose the **correct** answer from the options given below :

- (1) B, D, and E only (2) A, B, and C only
 (3) A, B, and D only (4) B, C, and D only

Answer (3)

Sol. Number of atoms = $\frac{\text{given mass}}{\text{molar mass}} \times \text{atomicity} \times N_A$

A. $\frac{212}{106} \times 6 \times N_A = 12 N_A$

B. $\frac{248}{62} \times 3 \times N_A = 12 N_A$

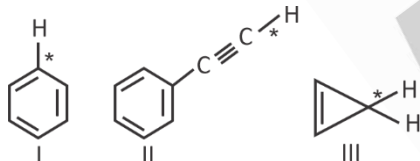
C. $\frac{240}{40} \times 3 \times N_A = 18 N_A$

D. $\frac{12}{2} \times N_A \times 2 = 12 N_A$

E. $\frac{220}{44} \times N_A \times 3 = 15 N_A$

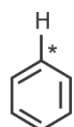
A, B and D have same number of atoms

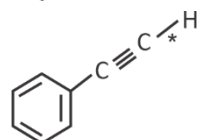
55. Among the given compounds I-III, the correct order of bond dissociation energy of C–H bond marked with * is :




- (1) II > III > I (2) II > I > III
 (3) I > II > III (4) III > II > I

Answer (2)

Sol. I.  carbon of this bond is sp^2 hybridised

II.  carbon of this bond is sp hybridised

III.  carbon of this bond is sp^3 hybridised

Higher the percentage s character, stronger is C–H bond. Correct order of bond dissociation energy of C–H bond:

II > I > III

56. The standard heat of formation, in kcal/mol of Ba^{2+} is :

[Given : standard heat of formation of SO_4^{2-} ion (aq) = -216 kcal/mol, standard heat of crystallisation of $\text{BaSO}_4(\text{s}) = -4.5$ kcal/mol, standard heat of formation of $\text{BaSO}_4(\text{s}) = -349$ kcal/mol]

(1) $+220.5$

(2) -128.5

(3) -133.0

(4) $+133.0$

Answer (2)



From equation (1),(2) and (3) we get equation (4). Applying equation (3) – (1) – (2)

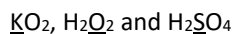
So, $-349 - (-216) - (-4.5)$

$= -349 + 216 + 4.5$

$= -128.5$

$= -128.5 \text{ kcal/mol}$

57. Consider the following compounds :



The oxidation state of the underlined elements in them are, respectively,

(1) $+4, -4$, and $+6$

(2) $+1, -1$, and $+6$

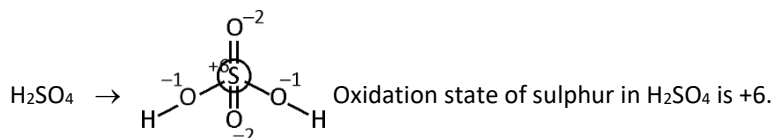
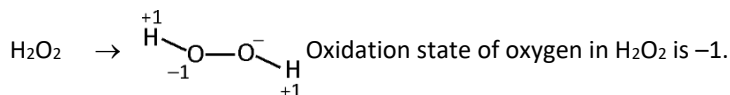
(3) $+2, -2$, and $+6$

(4) $+1, -2$, and $+4$

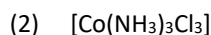
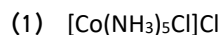
Answer (2)

Sol.

$\text{KO}_2 \rightarrow$ Alkali metal always shows $+1$ oxidation state. Therefore oxidation state of K is $+1$.



58. Out of the following complex compounds, which of the compound will be having the minimum conductance in solution?

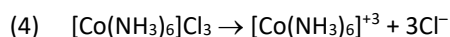
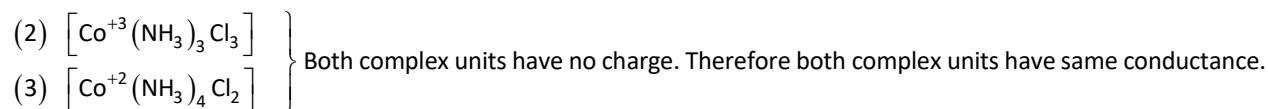
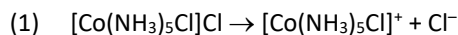


Answer (2, 3)

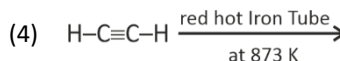
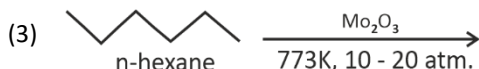
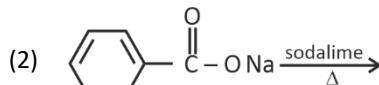
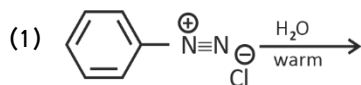
Sol. Conductance of any complex depends on the following factor.

(1) Number of ions produced by complex.

(2) If number of ions are same then we will check charge on complex unit.

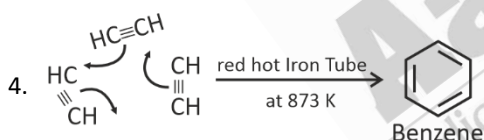
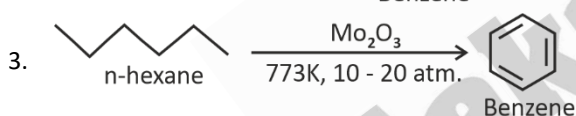
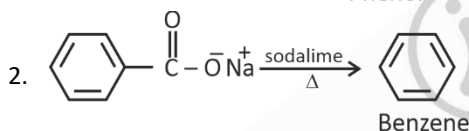
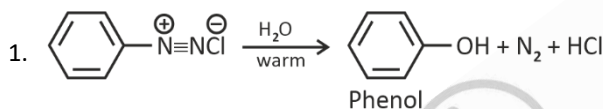


59. Which one of the following reactions does **NOT** give benzene as the product?

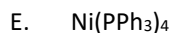
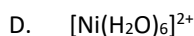
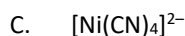


Answer (1)

Sol.



60. Which of the following are paramagnetic?



Choose the **correct** answer from the options given below :

(1) A, D and E only

(2) A and C only

(3) B and E only

(4) A and D only

Answer (4)

Sol.

A. $[\text{NiCl}_4]^{2-}$; Ni^{+2} ; $3d^8$; sp^3 hybridisation; 2 unpaired electrons; paramagnetic

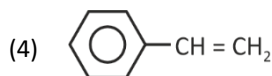
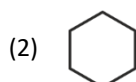
B. $\text{Ni}(\text{CO})_4$; Ni; $3d^8 4s^2$; sp^3 hybridisation; Zero unpaired electron; diamagnetic

C. $[\text{Ni}(\text{CN})_4]^{2-}$; Ni^{+2} ; $3d^8$; dsp^2 hybridisation; Zero unpaired electron; diamagnetic

D. $[\text{Ni}(\text{H}_2\text{O})_6]^{2+}$; Ni^{2+} ; $3d^8$; sp^3d^2 hybridisation; Two unpaired electron; paramagnetic

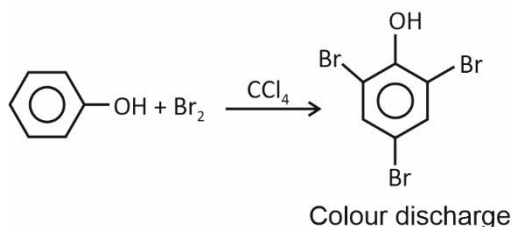
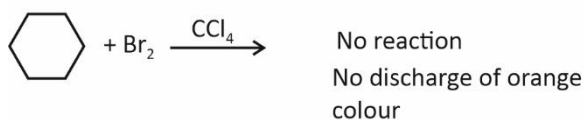
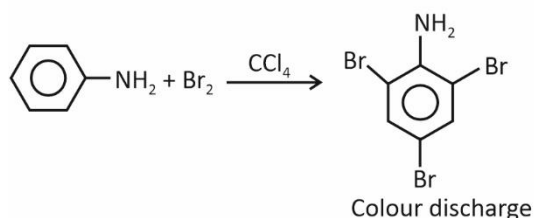
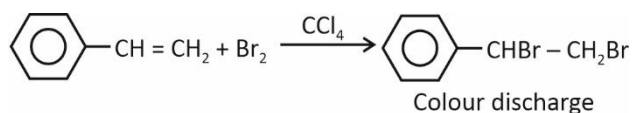
E. $\text{Ni}(\text{PPh}_3)_4$; Ni; $3d^8 4s^2$; sp^3 hybridisation; zero unpaired electron; Diamagnetic

61. Which one of the following compounds **does not** decolourize bromine water?



Answer (2)

Sol. Test for unsaturation i.e. Bromine water Reddish orange colour of bromine solution in CCl_4 will discharge when bromine adds to an unsaturation site.



62. Match **List-I** with **List-II**.

	List-I		List-II
A.	Haber process	I.	Fe catalyst
B.	Wacker oxidation	II.	PdCl_2
C.	Wilkinson catalyst	III.	$[(\text{PPh}_3)_3\text{RhCl}]$
D.	Ziegler catalyst	IV.	TiCl_4 with $\text{Al}(\text{CH}_3)_3$

Choose the **correct** answer from the options given below :

- (1) A-I, B-IV, C-III, D-II
- (2) A-I, B-II, C-IV, D-III
- (3) A-II, B-III, C-I, D-IV
- (4) A-I, B-II, C-III, D-IV

Answer (4)**Sol.**

	Process		Catalyst used
A.	Haber process	I.	Fe catalyst
B.	Wacker oxidation	II.	PdCl_2
C.	Wilkinson catalyst	III.	$[(\text{PPh}_3)_3\text{RhCl}]$
D.	Ziegler catalyst	IV.	TiCl_4 with $\text{Al}(\text{CH}_3)_3$

63. Match List-I with List-II.

	List-I (Name of Vitamin)		List-II (Deficiency disease)
A.	Vitamin B_{12}	I.	Cheilosis
B.	Vitamin D	II.	Convulsions
C.	Vitamin B_2	III.	Rickets
D.	Vitamin B_6	IV.	Pernicious anaemia

Choose the **correct** answer from the options given below:

- (1) A-IV, B-III, C-II, D-I (2) A-I, B-III, C-II, D-IV
 (3) A-IV, B-III, C-I, D-II (4) A-II, B-III, C-I, D-IV

Answer (3)**Sol.**

	List-I (Name of Vitamin)	List-II (Deficiency disease)
A.	Vitamin B_{12}	Pernicious anaemia
B.	Vitamin D	Rickets
C.	Vitamin B_2	Cheilosis
D.	Vitamin B_6	Convulsions

64. Given below are two statements :

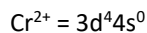
Statement I : Ferromagnetism is considered as an extreme form of paramagnetism.**Statement II** : The number of unpaired electrons in a Cr^{2+} ion ($Z = 24$) is the same as that of a Nd^{3+} ion ($Z = 60$).In the light of the above statements, choose the **correct** answer from the options given below :

- (1) Statement I is false but Statement II is true (2) Both Statement I and Statement II are true
 (3) Both Statement I and Statement II are false (4) Statement I is true but Statement II is false

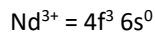
Answer (4)

Sol. Substances which are attracted very strongly in applied magnetic field are termed as ferromagnetic. Infact, ferromagnetism is an extreme form of paramagnetism.

Hence statement I is correct.



Unpaired electrons = 4



Unpaired electrons = 3

Hence, Statement II is incorrect

65. If the half-life ($t_{1/2}$) for a first order reaction is 1 minute, then the time required for 99.9% completion of the reaction is closest to :

- (1) 10 minutes (2) 2 minutes
(3) 4 minutes (4) 5 minutes

Answer (1)

Sol. For 1st order reaction

$$kt = 2.303 \log \frac{A_0}{A_t} \quad A_0 = \text{initial concentration}$$

A_t = Final concentration

$$t_{99.9\%} = 10 t_{1/2}$$

$$t_{99.9\%} = 10 \times 1 \text{ minute} = 10 \text{ minutes}$$

66. The correct order of decreasing basic strength of the given amines is:

- (1) benzenamine > ethanamine > N-methylaniline > N-ethylethanamine
(2) N-methylaniline > benzenamine > ethanamine > N-ethylethanamine
(3) N-ethylethanamine > ethanamine > benzenamine > N-methylaniline
(4) N-ethylethanamine > ethanamine > N-methylaniline > benzenamine

Answer (4)

Sol. Lower is the value of pK_b , higher is the basicity

Also aliphatic amines are stronger bases than aromatic amines.

pK_b : Benzenamine > N-Methylaniline > Ethanamine > N-Ethylethanamine

Basic strength : N-Ethylethanamine > Ethanamine > N-Methylaniline > Benzenamine

67. Match List I with List II

	List-I (Ion)		List-II (Group Number in Cation Analysis)
A.	Co^{2+}	I.	Group-I
B.	Mg^{2+}	II.	Group-III
C.	Pb^{2+}	III.	Group-IV
D.	Al^{3+}	IV.	Group-VI

Choose the **correct** answer from the options given below :

(1) A-III, B-II, C-I, D-IV

(2) A-III, B-IV, C-II, D-I

(3) A-III, B-IV, C-I, D-II

(4) A-III, B-II, C-IV, D-I

Answer (3)**Sol.**

	Ion	Group number in Cation Analysis
A.	Co^{2+}	Group-IV
B.	Mg^{2+}	Group-VI
C.	Pb^{2+}	Group-I
D.	Al^{3+}	Group-III

68. Phosphoric acid ionizes in three steps with their ionization constant values K_{a_1} , K_{a_2} and K_{a_3} , respectively, while K is the overall ionization constant. Which of the following statements are true?

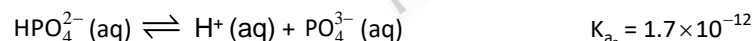
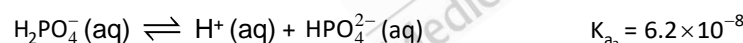
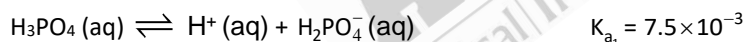
A. $\log K = \log K_{a_1} + \log K_{a_2} + \log K_{a_3}$ B. H_3PO_4 is a stronger acid than H_2PO_4^- and HPO_4^{2-} C. $K_{a_1} > K_{a_2} > K_{a_3}$ D. $K_{a_1} = \frac{K_{a_3} + K_{a_2}}{2}$ Choose the **correct** answer from the options given below :

(1) A, B and C only

(2) A and B only

(3) A and C only

(4) B, C and D only

Answer (1)**Sol.** H_3PO_4 is a stronger acid than H_2PO_4^- and HPO_4^{2-} 

$$K_{a_1} > K_{a_2} > K_{a_3}$$

$$\log K = \log K_{a_1} + \log K_{a_2} + \log K_{a_3}$$

Ans. (A), (B) and (C) only

69. Which of the following statements are true?

A. Unlike Ga that has a very high melting point, Cs has a very low melting point.

B. On Pauling scale, the electronegativity values of N and Cl are not the same.

C. Ar , K^+ , Cl^- , Ca^{2+} , and S^{2-} are all isoelectronic species.D. The correct order of the first ionization enthalpies of Na, Mg, Al, and Si is $\text{Si} > \text{Al} > \text{Mg} > \text{Na}$.

E. The atomic radius of Cs is greater than that of Li and Rb.

Choose the **correct** answer from the options given below :

(1) A, C, and E only

(2) A, B, and E only

(3) C and E only

(4) C and D only

Answer (3)

Sol. Both Ga and Cs have low melting points.

Element	Melting point/K
Ga	303
Cs	302

- On Pauling scale, the electronegativity value of N and Cl have same (3.0).
- Ar, K^+ , Cl^- , Ca^{2+} and S^{2-} have 18 electrons. So these are isoelectronic species.
- The correct order of first ionization enthalpy is $Si > Mg > Al > Na$
First ionisation enthalpy of Mg is higher than Al because the penetration of a 3s-electron to the nucleus is more than that of a 2p-electron.
- Generally down the group atomic radii increases

Atom	Atomic radius/pm
Li	152
Rb	244
CS	262

70. Given below are two statements :

Statement I : Like nitrogen that can form ammonia, arsenic can form arsine.

Statement II : Antimony cannot form antimony pentoxide.

In the light of the above statements, choose the **most appropriate** answer from the options given below :

- (1) Statement I is incorrect but Statement II is correct
- (2) Both Statement I and Statement II are correct
- (3) Both Statement I and Statement II are incorrect
- (4) Statement I is correct but Statement II is incorrect

Answer (4)

Sol. All the elements of group 15 form hydrides of EH_3 type. Nitrogen forms ammonia (NH_3) while Arsenic forms Arsine (AsH_3)

All the elements of group 15 form two types of oxides : E_2O_3 and E_2O_5

Antimony forms antimony pentoxide Sb_2O_5

Hence, statement I is correct and statement II is incorrect

71. Which of the following aqueous solution will exhibit highest boiling point?

- (1) 0.015M $C_6H_{12}O_6$
- (2) 0.01M Urea
- (3) 0.01M KNO_3
- (4) 0.01M Na_2SO_4

Answer (4)

Sol.

$$\Delta T_b = iK_b \times m$$

$$\Delta T_b \propto i \times m$$

By considering molarity same as molality

$$(1) \quad 0.015 \text{ M C}_6\text{H}_{12}\text{O}_6 \quad i \times m = 1 \times 0.015 = 0.015$$

$$(2) \quad 0.01 \text{ M Urea} \quad i \times m = 1 \times 0.01 = 0.01$$

$$(3) \quad 0.01 \text{ M KNO}_3 \quad i \times m = 2 \times 0.01 = 0.02$$

$$(4) \quad 0.01 \text{ M Na}_2\text{SO}_4 \quad i \times m = 3 \times 0.01 = 0.03$$

$$T'_b = T_b^* + \Delta T_b$$

Higher the value of $(i \times m)$ more will be the boiling point.

72. Given below are two statements :

Statement-I : Benzenediazonium salt is prepared by the reaction of aniline with nitrous acid at 273 – 278 K. It decomposes easily in the dry state.

Statement-II : Insertion of iodine into the benzene ring is difficult and hence iodobenzene is prepared through the reaction of benzenediazonium salt with KI.

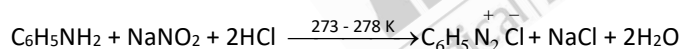
In the light of the above statements, choose the **most appropriate** answer from the options given below :

- (1) Statement I is incorrect but Statement II is correct
- (2) Both Statement I and Statement II are correct
- (3) Both Statement I and Statement II are incorrect
- (4) Statement I is correct but Statement II is incorrect

Answer (2)

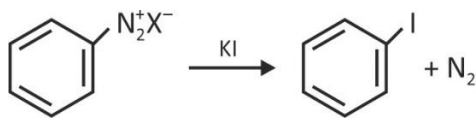
Sol. Benzene diazonium chloride is prepared by the reaction of aniline with nitrous acid at 273-278 K.

Nitrous acid is produced in the reaction mixture by reaction of NaNO_2 with HCl.

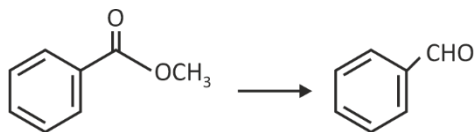


Benzene diazonium chloride decomposes easily in the dry state

Iodobenzene is prepared by shaking benzene diazonium salt with KI because direct insertion of iodine into benzene ring is difficult



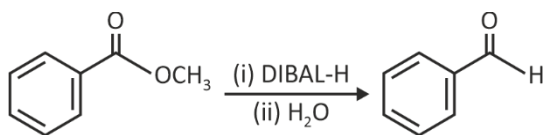
73. Identify the suitable reagent for the following conversion.



- | | |
|--|---|
| (1) $\text{H}_2/\text{Pd}-\text{BaSO}_4$ | (2) (i) LiAlH_4 , (ii) $\text{H}^+/\text{H}_2\text{O}$ |
| (3) (i) $\text{AlH}(\text{iBu})_2$, (ii) H_2O | (4) (i) NaBH_4 , (ii) $\text{H}^+/\text{H}_2\text{O}$ |

Answer (3)

Sol. Esters are reduced to aldehydes with DIBAL-H



74. Given below are two statements : one is labelled as **Assertion (A)** and the other is labelled as **Reason (R)**.

Assertion (A) : undergoes $\text{S}_{\text{N}}2$ reaction faster than .

Reason (R) : Iodine is a better leaving group because of its large size.

In the light of the above statements, choose the **correct** answer from the options given below:

- (1) **A** is false but **R** is true
- (2) Both **A** and **R** are true and **R** is the correct explanation of **A**
- (3) Both **A** and **R** are true but **R** is **not** the correct explanation of **A**
- (4) **A** is true but **R** is false

Answer (2)

Sol. Rate of $\text{S}_{\text{N}}2$ reaction of is faster than .

Because iodine is a good leaving group due to large size of iodine. Which stabilises the I^- ion.

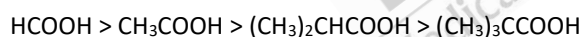
75. The correct order of decreasing acidity of the following aliphatic acids is

- (1) $\text{HCOOH} > (\text{CH}_3)_3\text{CCOOH} > (\text{CH}_3)_2\text{CHCOOH} > \text{CH}_3\text{COOH}$
- (2) $(\text{CH}_3)_3\text{CCOOH} > (\text{CH}_3)_2\text{CHCOOH} > \text{CH}_3\text{COOH} > \text{HCOOH}$
- (3) $\text{CH}_3\text{COOH} > (\text{CH}_3)_2\text{CHCOOH} > (\text{CH}_3)_3\text{CCOOH} > \text{HCOOH}$
- (4) $\text{HCOOH} > \text{CH}_3\text{COOH} > (\text{CH}_3)_2\text{CHCOOH} > (\text{CH}_3)_3\text{CCOOH}$

Answer (4)

Sol. Electron donating group decreases the acidity of carboxylic acids.

So correct order is

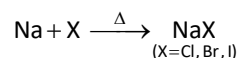
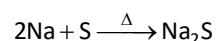
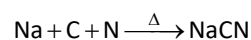


76. Which one of the following reactions does **NOT** belong to "Lassaigne's test"?

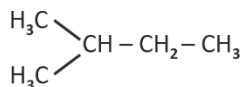
- (1) $2\text{CuO} + \text{C} \xrightarrow{\Delta} 2\text{Cu} + \text{CO}_2$
- (2) $\text{Na} + \text{C} + \text{N} \xrightarrow{\Delta} \text{NaCN}$
- (3) $2\text{Na} + \text{S} \xrightarrow{\Delta} \text{Na}_2\text{S}$
- (4) $\text{Na} + \text{X} \xrightarrow{\Delta} \text{NaX}$

Answer (1)

Sol. Nitrogen, sulphur, halogens and phosphorus present in an organic compound are detected by "Lassaigne's test".



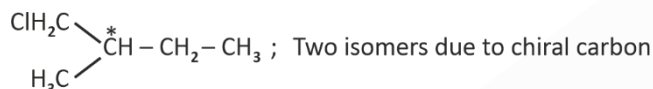
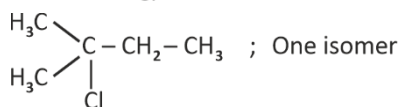
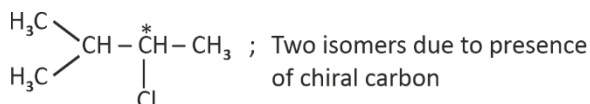
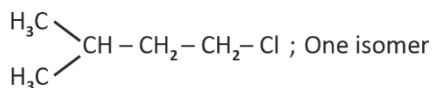
77. How many products (including stereoisomers) are expected from monochlorination of the following compound?



- (1) 6 (2) 2
(3) 3 (4) 5

Answer (1)

Sol. Possible monochlorination products :



Total 6 isomers

78. Sugar 'X'

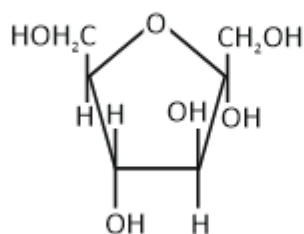
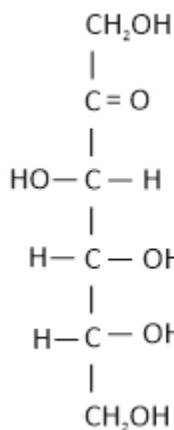
- A. is found in honey
B. is a keto sugar
C. exists in α and β – anomeric forms.
D. Is laevorotatory.

'X' is :

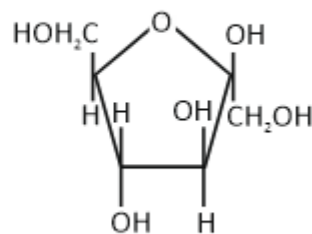
- (1) Sucrose (2) D-Glucose
(3) D-Fructose (4) Maltose

Answer (3)

Sol. D-Fructose is found in honey and is a keto sugar.



α -D-(-)-Fructofuranose



β -D-(-)-Fructofuranose

D-(-) — Fructose

79. Dalton's Atomic theory could not explain which of the following?

- | | |
|--------------------------------|---------------------------------|
| (1) Law of gaseous volume | (2) Law of conservation of mass |
| (3) Law of constant proportion | (4) Law of multiple proportion |

Answer (1)

Sol. Dalton's theory could explain the laws of chemical combination. However, it could not explain the laws of gaseous volumes.

80. Higher yield of NO in $\text{N}_2(\text{g}) + \text{O}_2(\text{g}) \rightleftharpoons 2\text{NO}(\text{g})$ can be obtained at

$[\Delta H \text{ of the reaction} = +180.7 \text{ kJ mol}^{-1}]$

- A. Higher temperature
B. Lower temperature
C. Higher concentration of N_2
D. Higher concentration of O_2

Choose the **correct** answer from the options given below :

- | | |
|------------------|------------------|
| (1) A, C, D only | (2) A, D only |
| (3) B, C only | (4) B, C, D only |

Answer (1)

Sol. Yield of the product generally depends on

- Temperature
- Concentration of reactant(s) and product(s)
- Pressure

As this is an endothermic reaction ($\Delta H = +180.7 \text{ kJ mol}^{-1}$), so, increase in temperature will shift equilibrium in forward direction to increase yield of NO.

Increase in concentration of reactants (N_2 and O_2) also shifts the equilibrium in forward direction and increase the yield of NO.

Hence, (A), (C) and (D) only will increase yield of NO.

81. Match **List-I** with **List-II**



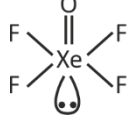

	List-I		List-II
A.	XeO_3	(I)	sp^3d ; linear
B.	XeF_2	(II)	sp^3 ; pyramidal
C.	XeOF_4	(III)	sp^3d^3 ; distorted octahedral
D.	XeF_6	(IV)	sp^3d^2 ; square pyramidal

Choose the **correct** answer from the options given below :

- (1) A-IV, B-II, C-I, D-III
- (2) A-II, B-I, C-IV, D-III
- (3) A-II, B-I, C-III, D-IV
- (4) A-IV, B-II, C-III, D-I

Answer (2)

Sol.

Molecule	Hybridisation	Shape
	sp^3	Pyramidal
	sp^3d	Linear
	sp^3d^2	Square Pyramidal
	sp^3d^3	Distorted Octahedral

82. Match List-I with List-II

List-I

(Example)

- A. Humidity
- B. Alloys
- C. Amalgams
- D. Smoke

List-II

(Type of Solution)

- I. Solid in solid
- II. Liquid in gas
- III. Solid in gas
- IV. Liquid in solid

Choose the **correct** answer from the options given below:

- (1) A-III, B-II, C-I, D-IV
- (2) A-II, B-IV, C-I, D-III
- (3) A-II, B-I, C-IV, D-III
- (4) A-III, B-I, C-IV, D-II

Answer (3)

Sol.

- Humidity is a solution of liquid in gas
- Alloy is a solution of solid in solid
- Amalgam is a solution of liquid in solid
- Smoke is a solution of solid in gas

83. Energy and radius of first Bohr orbit of He^+ and Li^{2+} are

[Given $R_H = 2.18 \times 10^{-18} \text{ J}$, $a_0 = 52.9 \text{ pm}$]

(1) $E_n(\text{Li}^{2+}) = -8.72 \times 10^{-16} \text{ J}$;

$r_n(\text{Li}^{2+}) = 17.6 \text{ pm}$

$E_n(\text{He}^+) = -19.62 \times 10^{-16} \text{ J}$;

$r_n(\text{He}^+) = 17.6 \text{ pm}$

(2) $E_n(\text{Li}^{2+}) = -19.62 \times 10^{-18} \text{ J}$;

$r_n(\text{Li}^{2+}) = 17.6 \text{ pm}$

$E_n(\text{He}^+) = -8.72 \times 10^{-18} \text{ J}$;

$r_n(\text{He}^+) = 26.4 \text{ pm}$

(3) $E_n(\text{Li}^{2+}) = -8.72 \times 10^{-18} \text{ J}$;

$r_n(\text{Li}^{2+}) = 26.4 \text{ pm}$

$E_n(\text{He}^+) = -19.62 \times 10^{-18} \text{ J}$;

$r_n(\text{He}^+) = 17.6 \text{ pm}$

(4) $E_n(\text{Li}^{2+}) = -19.62 \times 10^{-16} \text{ J}$;

$r_n(\text{Li}^{2+}) = 17.6 \text{ pm}$

$E_n(\text{He}^+) = -8.72 \times 10^{-16} \text{ J}$;

$r_n(\text{He}^+) = 26.4 \text{ pm}$

Answer (2)

Sol. $E_n = \frac{-2.18 \times 10^{-18} \times z^2}{n^2} \text{ J}$; $r_n = \frac{52.9 \times n^2}{z} \text{ pm}$

For He^+

$E_{\text{He}^+} = -2.18 \times 10^{-18} \times 4 = -8.72 \times 10^{-18} \text{ J}$

$r_{\text{He}^+} = \frac{52.9 \times 1}{2} = 26.45 \text{ pm}$

For Li^{2+}

$E_{\text{Li}^{2+}} = -2.18 \times 10^{-18} \times 9 = -19.62 \times 10^{-18} \text{ J}$

$r_{\text{Li}^{2+}} = \frac{52.9 \times 1}{3} = 17.63 \text{ pm}$

84. Which among the following electronic configurations belong to main group elements?

A. $[\text{Ne}]3s^1$

B. $[\text{Ar}]3d^34s^2$

C. $[\text{Kr}]4d^{10}5s^25p^5$

D. $[\text{Ar}]3d^{10}4s^1$

E. $[\text{Rn}]5f^96d^27s^2$

Choose the correct answer from the option given below :

(1) A, C and D only

(2) B and E only

(3) A and C only

(4) D and E only

Answer (3)

Sol. (A) $[\text{Ne}]3s^1$; Na (s-block)

(B) $[\text{Ar}]3d^34s^2$; V (d-block)

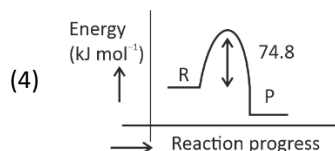
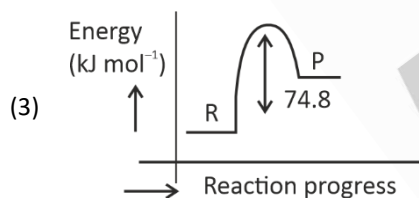
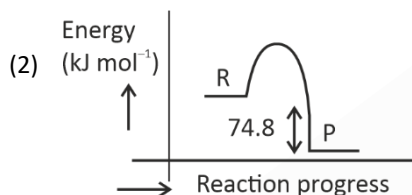
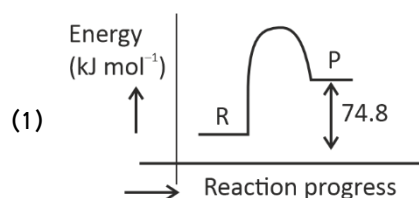
(C) $[\text{Kr}]4d^{10}5s^25p^5$; I (p-block)

(D) $[\text{Ar}]3d^{10}4s^1$; Cu (d-block)

(E) $[\text{Rn}]5f^06d^27s^2$; Th (f-block)

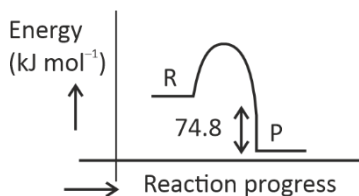
Main group elements (A and C only)

85. $\text{C(s)} + 2\text{H}_2(\text{g}) \rightarrow \text{CH}_4(\text{g}); \Delta H = -74.8 \text{ kJ mol}^{-1}$. Which of the following diagrams gives an accurate representation of the above reaction? [R \rightarrow reactants; P \rightarrow products]

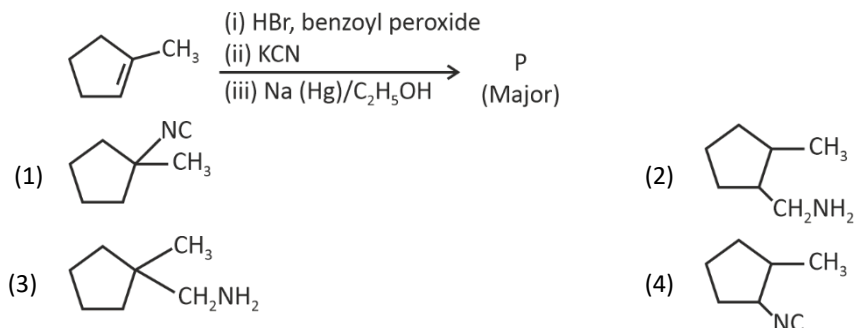
**Answer (2)**

Sol. $\Delta H = -74.8 \text{ kJ mol}^{-1}$, it is an exothermic reaction.

So, accurate representation is

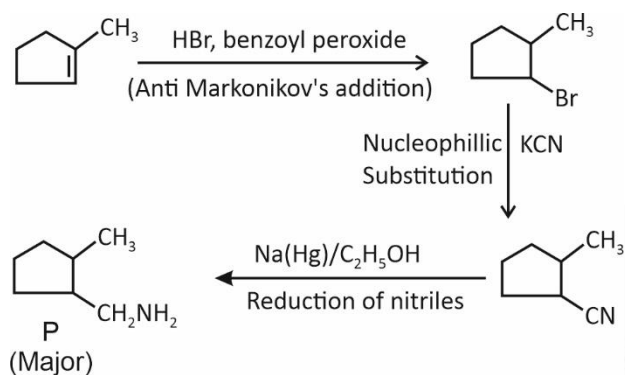


86. Predict the major product 'P' in the following sequence of reactions-



Answer (2)

Sol.



87. Identify the correct orders against the property mentioned

- $\text{H}_2\text{O} > \text{NH}_3 > \text{CHCl}_3$ – dipole moment
- $\text{XeF}_4 > \text{XeO}_3 > \text{XeF}_2$ – number of lone pairs on central atom
- $\text{O-H} > \text{C-H} > \text{N-O}$ – bond length
- $\text{N}_2 > \text{O}_2 > \text{H}_2$ – bond enthalpy

Choose the **correct** answer from the options given below:

- B, C only
- A, D only
- B, D only
- A, C only

Answer (2)

Sol.

	$\mu(\text{D})$
A. H_2O	1.85
NH_3	1.47
CHCl_3	1.04
B. XeF_4 : 2 lone pairs of electron	
XeO_3 : 1 lone pair of electron	
XeF_2 : 3 lone pairs of electron	

C. Order of Bond length :- $\text{N-O} > \text{C-H} > \text{O-H}$

D. N_2 Bond order is 3

H_2 Bond order is 1

O_2 Bond order is 2

88. Total number of possible isomers (both structural as well as stereoisomers) of cyclic ethers of molecular formula $\text{C}_4\text{H}_8\text{O}$ is :

(1) 11

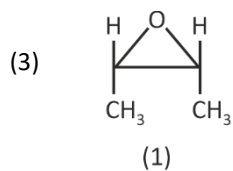
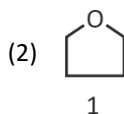
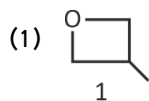
(2) 6

(3) 8

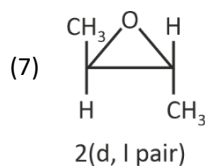
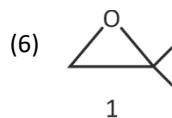
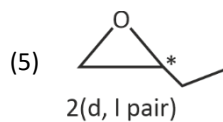
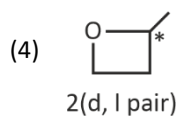
(4) 10

Answer (4)

Sol. For cyclic ethers O should be in ring * carbon here is chiral



Meso compound



Total number of isomers = $2 + 1 + 1 + 1 + 2 + 1 + 2 = 10$

89. For the reaction $A(g) \rightleftharpoons 2B(g)$, the backward reaction rate constant is higher than the forward reaction rate constant by a factor of 2500, at 1000 K.

[Given : $R = 0.0831 \text{ L atm mol}^{-1} \text{ K}^{-1}$]

K_p for the reaction at 1000 K is

- (1) 0.021
- (2) 83.1
- (3) 2.077×10^5
- (4) 0.033

Answer (4)

Sol. $K_C = \frac{k_f}{k_b} = \frac{1}{2500}$

$$K_p = K_C (RT)^{\Delta n_g} \quad (\Delta n_g = 2 - 1 = 1)$$

$$= \frac{1}{2500} \times 0.0831 \times 1000$$

$$= 0.033$$

90. 5 moles of liquid X and 10 moles of liquid Y make a solution having a vapour pressure of 70 torr. The vapour pressures of pure X and Y are 63 torr and 78 torr respectively. Which of the following is true regarding the described solution?

- (1) The solution has volume greater than the sum of individual volumes.
- (2) The solution shows positive deviation.
- (3) The solution shows negative deviation.
- (4) The solution is ideal.

Answer (3)

Sol. $P_{\text{total}} = X_x P_x^\circ + X_y P_y^\circ$

$$= \frac{5}{15} \times 63 + \frac{10}{15} \times 78$$

$$= 21 + 52$$

$$= 73 \text{ torr}$$

Observed total pressure of solution is 70 torr.

It is less than calculated total pressure.

Hence, it shows negative deviation.

BIOLOGY

91. Which of the following is the unit of productivity of an Ecosystem?

- (1) $(\text{KCal m}^{-2})\text{yr}^{-1}$ (2) gm^{-2}
(3) KCal m^{-2} (4) KCal m^{-3}

Answer (1)

Sol. The rate of biomass production is called productivity. It is expressed in terms of $\text{gm}^{-2}\text{yr}^{-1}$ or $(\text{KCal m}^{-2})\text{yr}^{-1}$ to compare the productivity of different ecosystems.

92. The first menstruation is called :

- (1) Ovulation (2) Menopause
(3) Menarche (4) Diapause

Answer (3)

Sol. The first menstruation begins at puberty and is called menarche.

- Ovulation is the process that deals with the release of secondary oocyte from the mature Graafian follicle.
- In human beings, menstrual cycles ceases around 50 years of age; that is termed as menopause.
- Diapause is a state of dormancy or developmental arrest in an organism.

93. Given below are two statements: one is labelled as **Assertion (A)** and the other is labelled as **Reason (R)**.

Assertion (A) : All vertebrates are chordates but all chordates are not vertebrate.

Reason (R) : The members of subphylum vertebrata possess notochord during the embryonic period, the notochord is replaced by cartilaginous or bony vertebral column in adults.

In the light of the above statements, choose the **correct** answer from the options given below:

- (1) **(A)** is false but **(R)** is true
(2) Both **(A)** and **(R)** are true and **(R)** is the correct explanation of **(A)**
(3) Both **(A)** and **(R)** are true but **(R)** is **not** the correct explanation of **(A)**
(4) **(A)** is true but **(R)** is false

Answer (2)

Sol. Both (A) and (R) are true and (R) is the correct explanation of (A).

The members of subphylum vertebrata possess notochord during the embryonic period. The notochord is replaced by a cartilaginous or bony vertebral column in the adult.

Thus, all vertebrates are chordates but all chordates are not vertebrates.

94. Genes R and Y follow independent assortment. If RRY Y produce round yellow seeds and rryy produce wrinkled green seeds, what will be the phenotypic ratio of the F₂ generation?

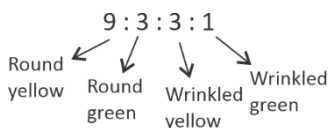
- (1) Phenotypic ratio - 9 : 7 (2) Phenotypic ratio - 1 : 2 : 1
(3) Phenotypic ratio - 3 : 1 (4) Phenotypic ratio - 9 : 3 : 3 : 1

Answer (4)

Sol. A classical dihybrid cross performed by Mendel involves.

A cross which was made between a pure round yellow seeded pea plant (RRYY) with wrinkled green seeded plant (rryy). Yellow colour is dominant over green and round seed shape over wrinkled seed shape.

Phenotypic ratio in F₂ generation



95. Given below are two statements :

Statement I : The DNA fragments extracted from gel electrophoresis can be used in construction of recombinant DNA.

Statement II : Smaller size DNA fragments are observed near anode while larger fragments are found near the wells in an agarose gel.

In the light of the above statements, choose the **most appropriate** answer from the options given below :

- (1) Statement I is incorrect but statement II is correct (2) Both statement I and statement II are correct
(3) Both statement I and statement II are incorrect (4) Statement I is correct but statement II is incorrect

Answer (2)

Sol. The cutting of DNA by restriction endonucleases results in the fragments of DNA. These fragments can be separated by a technique known as gel electrophoresis.

The separated bands of DNA are cut out from the agarose gel and extracted from the gel piece. This step is known as elution. The DNA fragments purified in this way are used in constructing rDNA by joining them with cloning vectors.

- In gel electrophoresis, the DNA fragments separate (resolve) according to their size through sieving effect provided by the agarose gel. Hence, the smaller the fragment size, the farther it moves from cathode towards anode.

96. What is the main function of the spindle fibers during mitosis?

- (1) To regulate cell growth (2) To separate the chromosomes
(3) To synthesize new DNA (4) To repair damaged DNA

Answer (2)

Sol. During mitosis, spindle fibre get attach to the kinetochores of the chromosome and help in the separation of the chromosome.

97. How many meiotic and mitotic divisions need to occur for the development of a mature female gametophyte from the megaspore mother cell in an angiosperm plant?

- (1) No Meiosis and 2 Mitosis (2) 2 Meiosis and 3 Mitosis
(3) 1 Meiosis and 2 Mitosis (4) 1 Meiosis and 3 Mitosis

Answer (4)

Sol. Development of a mature female gametophyte, i.e., embryo sac from a megaspore mother cell in an angiosperm plant requires 1 meiotic and 3 mitotic divisions.

98. Identify the statement that is **NOT** correct.

- (1) Constant region of heavy and light chains are located at C-terminus of antibody molecules
- (2) Each antibody has two light and two heavy chains.
- (3) The heavy and light chains are held together by disulfide bonds.
- (4) Antigen binding site is located at C-terminal region of antibody molecules.

Answer (4)

Sol. Each antibody molecule has four peptide chains, two small called light chains and two longer called heavy chains. Hence, an antibody is represented as H_2L_2 .

In an antibody molecule, antigen binding site is located at N-terminal region.

99. Consider the following :

- A. The reductive division for the human female gametogenesis starts earlier than that of the male gametogenesis.
- B. The gap between the first meiotic division and the second meiotic division is much shorter for males compared to females.
- C. The first polar body is associated with the formation of the primary oocyte.
- D. Luteinizing Hormone (LH) surge leads to disintegration of the endometrium and onset of menstrual bleeding.

Choose the **correct** answer from the options given below:

- (1) B and C are true
- (2) A and B are true
- (3) A and C are true
- (4) B and D are true

Answer (2)

Sol. Statements A and B are true while statements C and D are false.

The first polar body is associated with the formation of the secondary oocyte LH surge leads to ovulation. Decreased levels of progesterone during late luteal phase leads to degeneration of the endometrium and onset of menstrual bleeding.

100. Given below are two statements : One is labelled as **Assertion (A)** and other is labelled as **Reason (R)**.

Assertion (A) : Cells of the tapetum possess dense cytoplasm and generally have more than one nucleus.

Reason (R) : Presence of more than one nucleus in the tapetum increases the efficiency of nourishing the developing microspore mother cells.

In light of the above statements, choose the **most appropriate** answer from the options given below:

- (1) **A** is false but **R** is true
- (2) Both **A** and **R** are true and **R** is the correct explanation of **A**
- (3) Both **A** and **R** are true but **R** is **NOT** the correct explanation of **A**
- (4) **A** is true but **R** is false

Answer (4)

Sol. Cell of the tapetum possess dense cytoplasm and generally have more than one nucleus because the presence of more than one nucleus in the tapetal cells increases the efficiency of nourishing the developing pollen grains.

101. The blue and white selectable markers have been developed which differentiate recombinant colonies from non-recombinant colonies on the basis of their ability to produce colour in the presence of a chromogenic substrate.

Given below are two statements about this method:

Statement I : The blue coloured colonies have DNA insert in the plasmid and they are identified as recombinant colonies.

Statement II : The colonies without blue colour have DNA insert in the plasmid and are identified as recombinant colonies.

In the light of the above statements, choose the **most appropriate** answer from the options given below:

- (1) **Statement I** is incorrect but **Statement II** is correct
- (2) Both **Statement I** and **Statement II** are correct
- (3) Both **Statement I** and **Statement II** are incorrect
- (4) **Statement I** is correct but **Statement II** is incorrect

Answer (1)

Sol. Statement I is incorrect but statement II is correct as a recombinant DNA is inserted within the coding sequence of an enzyme, β -galactosidase. This results into inactivation of the gene for synthesis of this enzyme. Thus, presence of insert results into insertional inactivation of the β -galactosidase gene and the colonies do not produce any colour and identified as recombinant colonies. Whereas non-recombinant transformants will produce blue colour in presence of chromogenic substrate.

102. In bryophytes, the gemmae help in which one of the following?

- (1) Gaseous exchange
- (2) Sexual reproduction
- (3) Asexual reproduction
- (4) Nutrient absorption

Answer (3)

Sol. Gemmae are green, multicellular, asexual buds which develop in small receptacles called gemma cups and help in asexual reproduction in bryophytes.

103. Match **List I** with **List II**:

	List-I		List-II
A.	Adenosine	I.	Nitrogen base
B.	Adenylic acid	II.	Nucleotide
C.	Adenine	III.	Nucleoside
D.	Alanine	IV.	Amino acid

Choose the option with all **correct** matches.

- (1) A-II, B-III, C-I, D-IV
- (2) A-III, B-IV, C-II, D-I
- (3) A-III, B-II, C-IV, D-I
- (4) A-III, B-II, C-I, D-IV

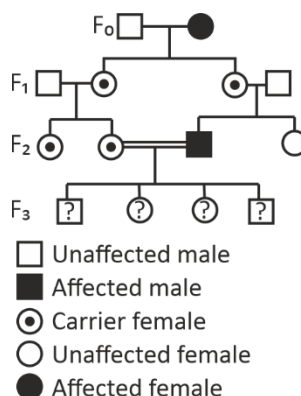
Answer (4)

Sol. The correct answer is A-III, B-II, C-I, D-IV

- Adenosine – It is a nucleoside which is composed of nitrogen base and sugar only.
- Adenylic acid – It is a nucleotide which is composed of nitrogen base, sugar and a phosphate group is esterified to the sugar.
- Adenine – Nitrogen base (Purine)

Alanine – An amino acid that contains a methyl group as the 'R' group.

104. With the help of given pedigree, find out the probability for the birth of a child having no disease and being a carrier (has the disease mutation in one allele of the gene) in F_3 generation.



- (1) Zero (2) $1/4$
 (3) $1/2$ (4) $1/8$

Answer (2)

Sol. As in the F_1 generation the carrier female and non-affected (normal, not carrier) had affected male child that means the genetic disorder is sex-linked recessive.

The consanguineous mating between female (X^cX) and male (X^cY)

	X^c	Y
X^c	X^cX^c	X^cY
X	X^cX	XY

Out of 4 child only one is carrier i.e. $\frac{1}{4}$.

105. Consider the following statements regarding function of adrenal medullary hormones :

- (A) It causes pupillary constriction.
 (B) It is a hyperglycemic hormone.
 (C) It causes piloerection.
 (D) It increases strength of heart contraction.

Choose the **correct** answer from the options given below :

- (1) D only
 (2) C and D only
 (3) B, C and D only
 (4) A, C and D only

Answer (3)

Sol. Adrenal medulla secretes two hormones called adrenaline or epinephrine and noradrenaline or norepinephrine (also called emergency hormones).

Both the hormones -

- Cause pupillary dilation (not constriction)
- Stimulate breakdown of glycogen resulting in increased concentration of glucose in blood *i.e.*, cause hyperglycemia.
- Cause piloerection (raising of hair).
- Increase strength of heart contraction *i.e.*, heartbeat.

106. Which of the following is an example of a zygomorphic flower?

- | | |
|------------|-------------|
| (1) Chilli | (2) Petunia |
| (3) Datura | (4) Pea |

Answer (4)

Sol. Zygomorphic flowers can be divided into two equal halves by only a single vertical plane and shows bilateral symmetry.

Pea possess zygomorphic flowers.

Chilli, Petunia and Datura possess actinomorphic flowers.

107. Who proposed that the genetic code for amino acids should be made up of three nucleotides?

- (1) Franklin Stahl
- (2) George Gamow
- (3) Francis Crick
- (4) Jacques Monod

Answer (2)

Sol. George Gamow, a physicist proposed that genetic code for amino acids should be made up of three nucleotides.

108. Given below are two statements:

Statement I: In ecosystem, there is unidirectional flow of energy of sun from producers to consumers.

Statement II: Ecosystems are exempted from 2nd law of thermodynamics.

In the light of the above statements, choose the **most appropriate** answer from the options given below:

- (1) Statement I is incorrect but statement II is correct
- (2) Both statement I and statement II are correct
- (3) Both statement I and statement II are incorrect
- (4) Statement I is correct but statement II is incorrect

Answer (4)

Sol. Sun is the only source of energy for all ecosystems on Earth, except for deep sea-hydro-thermal ecosystem.

The energy flow is unidirectional from the sun to producers and then to consumers.

Ecosystems are not exempted from the second law of thermodynamics. They need a constant supply of energy to synthesise the molecules they require to counteract the universal tendency towards increasing disorderliness.

109. Sweet potato and potato represent a certain type of evolution. Select the correct combination of terms to explain the evolution.

- | | |
|-------------------------|--------------------------|
| (1) Analogy, divergent | (2) Analogy, convergent |
| (3) Homology, divergent | (4) Homology, convergent |

Answer (2)

Sol. Sweet potato is a root modification while potato is a stem modification but both of them have same function. Analogous structures are not anatomically similar structures though they perform similar functions.

Analogous structures are the result of convergent evolution.

- Homologous organs are anatomically similar but they do not perform similar function. Homologous organs are the result of divergent evolution.

110. All living members of the class Cyclostomata are :

- | | |
|------------------|-----------------|
| (1) Ectoparasite | (2) Free living |
| (3) Endoparasite | (4) Symbiotic |

Answer (1)

Sol. All living members of class Cyclostomata are ectoparasites.

111. Histones are enriched with -

- | | |
|------------------------------|-----------------------------|
| (1) Phenylalanine & Arginine | (2) Lysine & Arginine |
| (3) Leucine & Lysine | (4) Phenylalanine & Leucine |

Answer (2)

Sol. In eukaryotes, packaging of DNA is much more complex. There is a set of positively charged, basic proteins called histones.

Histones are organised to form a unit of light molecules called histone octamer.

They are rich in the basic amino acid residues lysine and arginine.

112. Which one of the following equations represents the Verhulst-Pearl Logistic Growth of population?

- | |
|---|
| (1) $\frac{dN}{dt} = N \left(\frac{r-K}{K} \right)$ |
| (2) $\frac{dN}{dt} = r \left(\frac{K-N}{K} \right)$ |
| (3) $\frac{dN}{dt} = rN \left(\frac{K-N}{K} \right)$ |
| (4) $\frac{dN}{dt} = rN \left(\frac{N-K}{N} \right)$ |

Answer (3)

Sol. Logistic growth is described by Verhulst-Pearl logistic growth equation $\frac{dN}{dt} = rN \left(\frac{K-N}{K} \right)$.

113. Given below are two statements : one is labelled as **Assertion (A)**, and the other is labelled as **Reason (R)**.

Assertion (A) : The primary function of the Golgi apparatus is to package the materials made by the endoplasmic reticulum and deliver it to intracellular targets and outside the cell.

Reason (R) : Vesicles containing materials made by the endoplasmic reticulum fuse with the cis face of the Golgi apparatus, and they are modified and released from the trans face of the Golgi apparatus.

In the light of the above statements, choose the **correct** answer from the options given below :

- (1) **A** is false but **R** is true
- (2) Both **A** and **R** are true and **R** is the correct explanation of **A**
- (3) Both **A** and **R** are true but **R** is **not** the correct explanation of **A**
- (4) **A** is true but **R** is false

Answer (3)

Sol. The primary function of Golgi apparatus is to package the materials made by endoplasmic reticulum and deliver it to intracellular targets and outside the cell, this statement is correct and the reason statement is also correct. Golgi apparatus remains in close association with endoplasmic reticulum. Here, assertion and reason statements both are correct but reason is not correctly explaining assertion.

114. Which of the following statements about RuBisCO is true?

- (1) It catalyzes the carboxylation of RuBP
- (2) It is active only in the dark
- (3) It has higher affinity for oxygen than carbon dioxide
- (4) It is an enzyme involved in the photolysis of water

Answer (1)

Sol. Carboxylation is the most crucial step of the Calvin cycle where CO_2 is utilised for the carboxylation of RuBP. This reaction is catalysed by enzyme RuBP carboxylase. Since this enzyme also has an oxygenase activity, RuBisCO has higher affinity for carbon dioxide than oxygen.

115. Match **List-I** with **List-II**.

	List-I		List-II
A.	Progesterone	I.	Pars intermedia
B.	Relaxin	II.	Ovary
C.	Melanocyte stimulating hormone	III.	Adrenal Medulla
D.	Catecholamines	IV.	Corpus luteum

Choose the **correct** answer from the options given below :

- (1) A-III, B-II, C-IV, D-I
- (2) A-IV, B-II, C-I, D-III
- (3) A-IV, B-II, C-III, D-I
- (4) A-II, B-IV, C-I, D-III

Answer (2)

Sol. The correct answer is [A-IV, B-II, C-I, D-III]

- Progesterone – A steroidal hormone which is secreted by the corpus luteum
- Relaxin – A proteinaceous hormone which is secreted by the ovaries in the later stage of pregnancy
- Melanocyte stimulating hormone – A proteinaceous hormone released by the pars intermedia
- Catecholamines – An amino-acid derived hormone released from the adrenal medulla during emergency conditions

116. The protein portion of an enzyme is called:

- | | |
|----------------------|---------------|
| (1) Prosthetic group | (2) Cofactor |
| (3) Coenzyme | (4) Apoenzyme |

Answer (4)

Sol. There are number of cases in which non-protein constituents called co-factors are bound to the enzyme to make the enzyme catalytically active.

In these instances, the protein portion of the enzymes is called the apoenzyme.

Three kinds of co-factors are identified prosthetic groups, co-enzymes and metal ions. Prosthetic groups are organic compounds and they are tightly bound with apoenzyme. Co-enzymes are also organic compounds but their association with apoenzyme is only transient.

117. Which of the following enzyme(s) are **NOT** essential for gene cloning?

- A. Restriction enzymes
- B. DNA ligase
- C. DNA mutase
- D. DNA recombinase
- E. DNA polymerase

Choose the **correct** answer from the options given below:

- | | |
|------------------|------------------|
| (1) B and C only | (2) C and D only |
| (3) A and B only | (4) D and E only |

Answer (2)

Sol. Gene cloning is a process where a specific gene or DNA sequence is isolated and replicated, creating multiple identical copies.

In gene cloning, restriction enzymes, DNA ligase and DNA polymerase are primarily used.

118. Which of the following type of immunity is present at the time of birth and is a non-specific type of defence in the human body?

- (1) Humoral Immunity
- (2) Acquired Immunity
- (3) Innate Immunity
- (4) Cell-mediated Immunity

Answer (3)

Sol. Innate immunity is non-specific type of defence, that is present at the time of birth. This is accomplished by providing different types of barriers to the entry of the foreign agents into our body. Acquired immunity is pathogen specific, characterised by memory cells.

Immune response mediated by B-lymphocytes is humoral immunity and other immune response mediated by T-lymphocytes is called cell-mediated immunity.

119. Which factor is important for termination of transcription?

- | | |
|----------------------|----------------------|
| (1) γ (gamma) | (2) α (alpha) |
| (3) σ (sigma) | (4) ρ (rho) |

Answer (4)

Sol. In prokaryotes the RNA polymerase is only capable of catalysing the process of elongation. It associates transiently with initiation factor (σ) and termination factor (ρ) to initiate and terminate the transcription respectively.

120. Which of the following hormones released from the pituitary is actually synthesized in the hypothalamus?

- | | |
|---|--|
| (1) Adrenocorticotrophic hormone (ACTH) | (2) Luteinizing hormone (LH) |
| (3) Anti-diuretic hormone (ADH) | (4) Follicle-stimulating hormone (FSH) |

Answer (3)

Sol. Neurohypophysis *i.e.*, posterior pituitary (Pars nervosa) stores and releases two hormones called oxytocin and vasopressin (Also called ADH *i.e.*, antidiuretic hormone) which are actually synthesised by hypothalamus and are transported axonally to neurohypophysis. The pars distalis (anterior pituitary) produces follicle stimulating hormone (FSH), adrenocorticotrophic hormone (ACTH) and luteinizing hormone (LH).

121. Which of the following microbes is **NOT** involved in the preparation of household products?

- A. *Aspergillus niger*
- B. *Lactobacillus*
- C. *Trichoderma polysporum*
- D. *Saccharomyces cerevisiae*
- E. *Propionibacterium sharmanii*

Choose the **correct** answer from the options given below:

- | | |
|------------------|------------------|
| (1) C and E only | (2) A and B only |
| (3) A and C only | (4) C and D only |

Answer (3)

Sol. *Lactobacillus* is used for production of curd.

Saccharomyces cerevisiae is used for the fermentation of palm sap to obtain toddy drink.

Propionibacterium sharmanii is used for production of swiss cheese.

Aspergillus niger is used for the commercial production of citric acid.

Trichoderma polysporum is used for the production of cyclosporin A and also act as a biocontrol agent.

A, C are used in industrial production of citric acid and cyclosporin-A.

122. Given below are two statements :

Statement I : Fig fruit is a non-vegetarian fruit as it has enclosed fig wasps in it.

Statement II : Fig wasp and fig tree exhibit mutual relationship as fig wasp completes its life cycle in fig fruit and fig fruit gets pollinated by fig wasp.

In the light of the above statements, choose the **most appropriate** answer from the options given below :

- (1) Statement I is incorrect but statement II is correct (2) Both statement I and statement II are correct
(3) Both statement I and statement II are incorrect (4) Statement I is correct but statement II is incorrect

Answer (3)

Sol. Fig fruit is a vegetarian fruit as it only gets pollinated by wasp. Fig tree and fig wasps shows mutualism in which both species are benefitted. So, statement I is incorrect. Statement II is also not correct as fig inflorescence/flower gets pollinated by fig wasp.

123. Role of the water vascular system in Echinoderms is :

- A. Respiration and Locomotion
B. Excretion and Locomotion
C. Capture and transport of food
D. Digestion and Respiration
E. Digestion and Excretion

Choose the **correct** answer from the options given below :

- (1) B, D and E Only (2) A and B Only
(3) A and C Only (4) B and C Only

Answer (3)

Sol. Water vascular system in Echinoderms helps in locomotion, capture and transport of food and respiration.

Excretory system is absent in echinoderms. Excretion takes place through general body surface.

124. After maturation, in primary lymphoid organs, the lymphocytes migrate for interaction with antigens to secondary lymphoid organ(s) / tissue(s) like

- A. thymus B. bone marrow
C. spleen D. lymph nodes
E. Peyer's patches

Choose the **correct** answer from the options given below

- (1) C, D, E only (2) B, C, D only
(3) A, B, C only (4) E, A, B only

Answer (1)

Sol. The primary lymphoid organs are bone marrow and thymus where immature lymphocytes differentiate into antigen-sensitive lymphocytes.

After maturation, the lymphocytes migrate into secondary lymphoid organs like spleen, lymph nodes, Peyer's patches of small intestine and appendix.

These secondary lymphoid organ provide the sites for interaction of lymphocytes with the antigen.

125. Match **List I** with **List II**:

	List I		List II
A.	The Evil Quartet	I.	Cryopreservation
B.	Ex situ conservation	II.	Alien species invasion
C.	<i>Lantana camara</i>	III.	Causes of biodiversity losses
D.	Dodo	IV.	Extinction

Choose the option with all correct matches.

- (1) A-III, B-II, C-IV, D-I (2) A-III, B-II, C-I, D-IV
 (3) A-III, B-I, C-II, D-IV (4) A-III, B-IV, C-II, D-I

Answer (3)

Sol. The Evil Quartet – Causes of biodiversity losses
Ex situ conservation – Cryopreservation
Lantana camara – Alien species invasion
Dodo – Extinction

126. Read the following statements on plant growth and development.

- (A) Parthenocarpy can be induced by auxins.
- (B) Plant growth regulators can be involved in promotion as well as inhibition of growth.
- (C) Dedifferentiation is a pre-requisite for re-differentiation.
- (D) Absciscic acid is a plant growth promoter.
- (E) Apical dominance promotes the growth of lateral buds.

Choose the option with all correct statements.

- (1) B, D, E only
- (2) A, B, C only
- (3) A, C, E only
- (4) A, D, E only

Answer (2)

Sol. ABA is a plant growth inhibitor and an inhibitor of plant metabolism.
Apical dominance promotes growth of apical bud.
Statements A, B and C are correct.

127. Match **List-I** with **List-II**.

	List-I		List-II
A.	Pteridophyte	(I)	<i>Salvia</i>
B.	Bryophyte	(II)	<i>Ginkgo</i>
C.	Angiosperm	(III)	<i>Polytrichum</i>
D.	Gymnosperm	(IV)	<i>Salvinia</i>

Choose the option with all **correct** matches.

- (1) A-IV, B-III, C-II, D-I
- (2) A-III, B-IV, C-II, D-I
- (3) A-IV, B-III, C-I, D-II
- (4) A-III, B-IV, C-I, D-II

Answer (3)

- Sol.** Pteridophyte - *Salvinia*
Bryophyte - *Polytrichum*
Angiosperm - *Salvia*
Gymnosperm - *Ginkgo*

128. Why can't insulin be given orally to diabetic patients?

- (1) Its bioavailability will be increased (2) Human body will elicit strong immune response
(3) It will be digested in Gastro-Intestinal (GI) tract (4) Because of structural variation

Answer (3)

Sol. Insulin can't be administered orally to diabetic patients as being the proteinaceous molecule, it will be digested in gastro-intestinal tract.

129. Which one of the following is the characteristic feature of gymnosperms?

- (1) Gymnosperms have flowers for reproduction (2) Seeds are enclosed in fruits
(3) Seeds are naked (4) Seeds are absent

Answer (3)

Sol. The gymnosperms (*Gymnos* : naked, *sperma* seed) are plants in which the ovules are not enclosed by an ovary wall and remains exposed, both before and after fertilization. The seeds that develop post-fertilization, are not covered, *i.e.*, naked.

130. Frogs respire in water by skin and buccal cavity and on land by skin, buccal cavity and lungs.

Choose the **correct** answer from the following :

- (1) The statement is false for both the environment
(2) The statement is true for water but false for land
(3) The statement is true for both the environment
(4) The statement is false for water but true for land

Answer (4)

Sol. • In water, frogs respire through skin and not through buccal cavity *i.e.*, undergo cutaneous respiration only.
• On land, the buccal cavity, skin and lungs act as respiratory organs *i.e.*, undergo buccopharyngeal, cutaneous and pulmonary respiration.

131. Silencing of specific mRNA is possible via RNAi because of

- (1) Non-complementary ssRNA
(2) Complementary dsRNA
(3) Inhibitory ssRNA
(4) Complementary tRNA

Answer (2)

Sol. RNAi (RNA interference) takes place in all eukaryotic organisms as a method of cellular defense. This method involves silencing of a specific mRNA due to a complementary dsRNA molecule that binds to and prevents translation of the mRNA.

132. Twins are born to a family that lives next door to you. The twins are a boy and a girl. Which of the following must be true?

- (1) They have 75% identical genetic content.
- (2) They are monozygotic twins.
- (3) They are fraternal twins.
- (4) They were conceived through in vitro fertilization.

Answer (3)

Sol. Fraternal twins or dizygotic twins are 2 separate fertilized eggs, they usually develop 2 separate amniotic sacs, placentas and supporting structures.

If twins are a boy and a girl, this indicates they are fraternal twins.

133. Match **List I** with **List II** :

	List I		List II
A.	Scutellum	I.	Persistent nucellus
B.	Non-albuminous seed	II.	Cotyledon of Monocot seed
C.	Epiblast	III.	Groundnut
D.	Perisperm	IV.	Rudimentary cotyledon

Choose the option with all **correct** matches.

- (1) A-II, B- IV, C-III, D-I
- (2) A-II, B- III, C-IV, D-I
- (3) A-IV, B- III, C-II, D-I
- (4) A-IV, B- III, C-I, D-II

Answer (2)

Sol. Scutellum is cotyledon of monocot seed.

Groundnut seed is non-albuminous seed.

Epiblast is rudimentary cotyledon in monocot seed.

Perisperm is persistent nucellus.

134. In frog, the Renal portal system is a special venous connection that acts to link :

- (1) Kidney and lower part of body
- (2) Liver and intestine
- (3) Liver and kidney
- (4) Kidney and intestine

Answer (1)

Sol. In frogs, special venous connection between liver and intestine as well as the kidney and lower parts of the body are present in frogs. The former is called hepatic portal system and the latter is called renal portal system.

Sol. Streptokinase produced by the bacterium *Streptococcus* and modified by genetic engineering is used as a 'clot buster' for removing clots from blood vessels of patients who have undergone myocardial infarction leading to heart attack. Curd production is done by *Lactobacillus* and ethanol production is done by *Saccharomyces*.

138. Who is known as the father of Ecology in India?

- (1) Birbal Sahni
- (2) S.R. Kashyap
- (3) Ramdeo Misra
- (4) Ram Udar

Answer (3)

Sol. Ramdeo Misra is known as the father of Ecology in India.

139. Given below are two statements : One is labelled as **Assertion (A)** and the other is labelled as **Reason (R)**.

Assertion (A) : A typical unfertilised, angiosperm embryo sac at maturity is 8 nucleate and 7-celled.

Reason (R) : The egg apparatus has 2 polar nuclei.

In the light of the above statements, choose the **correct** answer from the options given below :

- (1) **A** is false but **R** is true
- (2) Both **A** and **R** are true and **R** is the correct explanation of **A**
- (3) Both **A** and **R** are true but **R** is **NOT** the correct explanation of **A**
- (4) **A** is true but **R** is false

Answer (4)

Sol. A typical Angiosperm embryo sac, at maturity is 7-celled and 8 nucleate.

Polar nuclei are situated below the egg apparatus in the large central cell.

Three cells are grouped together at micropylar end and constitute the egg apparatus.

Hence, A is true but R is false.

140. Neoplastic characteristics of cells refer to :

- A. A mass of proliferating cell
- B. Rapid growth of cells
- C. Invasion and damage to the surrounding tissue
- D. Those confined to original location

Choose the **correct** answer from the options given below:

- (1) B, C, D only
- (2) A, B only
- (3) A, B, C only
- (4) A, B, D only

Answer (3)

Sol. The correct answer will include : A, B and C only.

A neoplasm is a general term for any abnormal growth of tissue.

Neoplastic characteristics of cells refer to

- (1) A mass of proliferating cell.
- (2) Rapid growth of cells.
- (3) Invasion and damage to the surrounding tissue.

Cancer specifically refers to malignant neoplasms, which are cancerous and invasive.

Benign tumours remain confined to their original location. Thus, D is not included in the answer.

The malignant tumours, on the other hand are a mass of proliferating cells called neoplastic or tumour cells.

These cells grow very rapidly, invading and damaging the surrounding normal tissues.

141. Given below are the stages in the life cycle of pteridophytes. Arrange the following stages in the correct sequence.

- A. Prothallus stage
- B. Meiosis in spore mother cells
- C. Fertilisation
- D. Formation of archegonia and antheridia in gametophyte.
- E. Transfer of antherozoids to the archegonia in presence of water.

Choose the **correct** answer from the options given below:

- | | |
|-------------------|-------------------|
| (1) E, D, C, B, A | (2) B, A, D, E, C |
| (3) B, A, E, C, D | (4) D, E, C, A, B |

Answer (2)

Sol. In a pteridophytes life cycle, the correct sequence of stages will be given as follows:

B → Meiosis in spore mother cells

A → Prothallus stage

D → Formation of archegonia and antheridia in gametophyte

E → Transfer of antherozoids to the archegonia in presence of water

C → Fertilisation will occur

So, the correct sequence is B → A → D → E → C

142. Given below are two statements : One is labelled as **Assertion (A)** and the other is labelled as **Reason (R)**.

Assertion (A) : Both wind and water pollinated flowers are not very colourful and do not produce nectar.

Reason (R) : The flowers produce enormous amount of pollen grains in wind and water pollinated flowers.

In the light of the above statements, choose the **correct** answer from the options given below:

- (1) A is false but R is true
- (2) Both A and R are true and R is the correct explanation of A
- (3) Both A and R are true but R is **NOT** the correct explanation of A
- (4) A is true but R is false

Answer (3)

Sol. Both wind and water pollinated flowers are not very colourful and do not produce nectar, this is because they rely on wind and water to carry their pollen. Wind and water pollinated flower do not need to attract insect, so they did not evolve to produce bright coloured flower.

143. Which one of the following enzymes contains 'Haem' as the prosthetic group?

- (1) Catalase
- (2) RuBisCo
- (3) Carbonic anhydrase
- (4) Succinate dehydrogenase

Answer (1)

Sol. In peroxidase and catalase, which catalyze the breakdown of hydrogen peroxide to water and oxygen, haem is the prosthetic group and it is part of the active site of the enzymes.

Zinc is the cofactor in enzyme carbonic anhydrase.

RuBisCo is the most abundant protein in whole of the biosphere.

Succinate is the substrate of enzyme succinic dehydrogenase.

144. Match **List-I** with **List-II**.

	List-I		List-II
A.	Emphysema	I.	Rapid spasms in muscle due to low Ca^{++} in body fluid
B.	Angina Pectoris	II.	Damaged alveolar walls and decreased respiratory surface
C.	Glomerulonephritis	III.	Acute chest pain when not enough oxygen is reaching to heart muscle
D.	Tetany	IV.	Inflammation of glomeruli of kidney

Choose the **correct** answer from the options given below :

- (1) A-II, B-III, C-IV, D-I
- (2) A-III, B-I, C-IV, D-II
- (3) A-III, B-I, C-II, D-IV
- (4) A-II, B-IV, C-III, D-I

Answer (1)

Sol.

Emphysema	-	Damaged alveolar walls and decreased respiratory surface
Angina pectoris	-	Acute chest pain when not enough oxygen is reaching to heart muscle
Glomerulonephritis	-	Inflammation of glomeruli of kidney
Tetany	-	Rapid spasms in muscle due to low Ca^{++} in body fluid

145. Find the statement that is **NOT** correct with regard to the structure of monocot stem.

- (1) Phloem parenchyma is absent.
- (2) Hypodermis is parenchymatous.
- (3) Vascular bundles are scattered.
- (4) Vascular bundles are conjoint and closed.

Answer (2)

Sol. In monocot stem, hypodermis is sclerenchymatous.

146. Which of the following statement is **correct** about location of the male frog copulatory pad?
- (1) First digit of the fore limb (2) First and Second digit of fore limb
(3) First digit of hind limb (4) Second digit of fore limb

Answer (1)

Sol. In male frogs, copulatory pad is present on the first digit of the forelimbs which are absent in female frogs.

147. Given below are two statements:

Statement I : The primary source of energy in an ecosystem is solar energy.

Statement II : The rate of production of organic matter during photosynthesis in an ecosystem is called net primary productivity (NPP).

In the light of the above statements, choose the **most appropriate** answer from the options given below:

- (1) Statement I is incorrect but statement II is correct (2) Both statement I and statement II are correct
(3) Both statement I and statement II are incorrect (4) Statement I is correct but statement II is incorrect

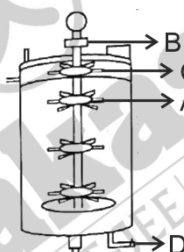
Answer (4)

Sol. Primary source of energy in the ecosystem is solar energy.

Gross primary productivity of an ecosystem is the rate of production of organic matter during photosynthesis.

Hence, statement I is correct but statement II is incorrect.

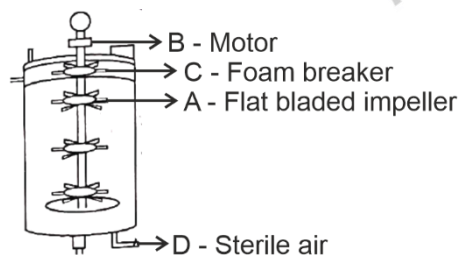
148. Identify the part of a bio-reactor which is used as a foam braker from the given figure.



- [illegible]

Answer (1)

Sol.



∴ Part labelled as C is foam breaker.

149. Polymerase chain reaction (PCR) amplifies DNA following the equation.

- | | |
|------------|--------------|
| (1) $2N^2$ | (2) N^2 |
| (3) 2^n | (4) $2n + 1$ |

Answer (3)

Sol. PCR *i.e.*, polymerase chain reaction amplifies DNA as per the equation 2^n , where 'n' refers to number of cycles.

Thus, say, if 3 PCR cycles will run, then 2^3 i.e., $2 \times 2 \times 2 \Rightarrow 8$ DNA fragments will be formed.

150. Match **List - I** with **List - II**.

	List - I		List - II
A.	Head	(I)	Enzymes
B.	Middle piece	(II)	Sperm motility
C.	Acrosome	(III)	Energy
D.	Tail	(IV)	Genetic material

Choose the correct answer from the options given below :

- (1) A-III, B-II, C-I, D-IV (2) A-IV, B-III, C-I, D-II
(3) A-IV, B-III, C-II, D-I (4) A-III, B-IV, C-II, D-I

Answer (2)

- Sol.**
- The sperm head contains elongated nucleus which possesses the genetic material.
 - The middle piece possesses numerous mitochondria, which produce energy for movement.
 - Acrosome is a cap-like structure filled with enzymes that help in fertilization of ovum.
 - The tail of sperm facilitates sperm motility essential for fertilisation.

151. Given below are two statements:

Statement I: In a floral formula \oplus stands for zygomorphic nature of the flower, and G stands for inferior ovary.

Statement II: In a floral formula \oplus stands for actinomorphic nature of the flower and G stands for superior ovary.

In the light of the above statements, choose the **correct** answer from the options given below:

- (1) Statement I is incorrect but Statement II is correct (2) Both Statement I and Statement II are correct
(3) Both Statement I and Statement II are incorrect (4) Statement I is correct but Statement II is incorrect

Answer (1)

Sol. The floral formula symbol \oplus is used for actinomorphic flower, while % is used for zygomorphic flower.

The symbol G represents gynoeceum and \underline{G} symbol represent superior ovary, while inferior ovary is represented by \bar{G} .

Thus, statement I is incorrect and Statement II is correct.

152. From the statements given below choose the **correct** option :

- A. The eukaryotic ribosomes are 80S and prokaryotic ribosomes are 70S.
- B. Each ribosome has two sub-units.
- C. The two sub-units of 80S ribosome are 60S and 40S while that of 70S are 50S and 30S.
- D. The two sub-units of 80S ribosome are 60S and 20S and that of 70S are 50S and 20S.
- E. The two sub-units of 80S are 60S and 30S and that of 70S are 50S and 30S.
- (1) B, D, E are true
- (2) A, B, C are true
- (3) A, B, D are true
- (4) A, B, E are true

Answer (2)

Sol. The eukaryotic ribosomes are 80S and prokaryotic ribosomes are 70S type.

Each ribosome has two sub-units.

The two sub-units of 80S ribosome are 60S and 40S while that of 70S are 50S and 30S.

153. Each of the following characteristics represent a Kingdom proposed by Whittaker. Arrange the following in increasing order of complexity of body organization.

- A. Multicellular heterotrophs with cell wall made of chitin.
- B. Heterotrophs with tissue/organ/organ system level of body organization.
- C. Prokaryotes with cell wall made of polysaccharides and amino acids.
- D. Eukaryotic autotrophs with tissue/organ level of body organization.
- E. Eukaryotes with cellular body organization.

Choose the **correct** answer from the options given below :

- | | |
|-------------------|-------------------|
| (1) C, E, A, B, D | (2) A, C, E, B, D |
| (3) C, E, A, D, B | (4) A, C, E, D, B |

Answer (3)

Sol. Increasing order of complexity of body organisation in the kingdom given by R.H. Whittaker is as follows-

C. Monera-Prokaryotes with cell wall made up of polysaccharide.

↓

E. Protista - Unicellular eukaryotes.

↓

A. Fungi -Multicellular heterotrophic with cell wall made up of chitin.

↓

D. Plantae - Eukaryotes autotrophs with tissue body organisation.

↓

B. Animalia - Heterotrophs with tissue organ/system of body organisation

Correct sequence is C, E, A, D, B.

154. The correct sequence of events in the life cycle of bryophytes is

- A. Fusion of antherozoid with egg.
- B. Attachment of gametophyte to substratum.
- C. Reduction division to produce haploid spores.
- D. Formation of sporophyte.
- E. Release of antherozoids into water.

Choose the **correct** answer from the options given below :

- | | |
|-------------------|-------------------|
| (1) D, E, A, B, C | (2) D, E, A, C, B |
| (3) B, E, A, C, D | (4) B, E, A, D, C |

Answer (4)

Sol. The correct sequence of events in the life cycle of bryophytes is

- Attachment of gametophyte to substratum.
- Release of antherozoids into water.
- Fusion of antherozoid with egg.
- Formation of sporophyte.
- Reduction division to produce haploid spores.

155. Which are correct:

- A. Computed tomography and magnetic resonance imaging detect cancers of internal organs.
- B. Chemotherapeutics drugs are used to kill non-cancerous cells.
- C. α -interferon activate the cancer patients' immune system and helps in destroying the tumour.
- D. Chemotherapeutic drugs are biological response modifiers.
- E. In the case of leukaemia blood cell counts are decreased.

Choose the **correct** answer from the options given below:

- (1) A and C only
- (2) B and D only
- (3) D and E only
- (4) C and D only

Answer (1)

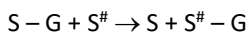
Sol. Statements A and C are correct while statements B, D and E are incorrect.

Chemotherapeutic drugs are used to kill cancerous cells.

In case of leukaemia, blood cell counts are increased.

α -interferons are biological response modifiers.

156. Name the class of enzyme that usually catalyze the following reaction :



Where, $G \rightarrow$ a group other than hydrogen

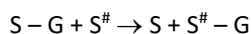
$S \rightarrow$ a substrate

$S^{\#} \rightarrow$ another substrate

- (1) Ligase
- (2) Hydrolase
- (3) Lyase
- (4) Transferase

Answer (4)

Sol. Enzymes catalysing a transfer of G group, (other than hydrogen) between a pair of substrates, S and S' are known as transferases.



- Ligases catalyse the linking together of 2 compounds such as C – O, C – S, C – N bonds etc
- Lyases catalyse removal of groups from substrates by mechanisms other than hydrolysis leaving double bonds

Hydrolases are enzymes that catalyse hydrolysis of ester, ether, peptide, glycosidic, C – C, C – halide or P – N bonds.

157. Find the correct statement :

- (A) In human pregnancy, the major organ systems are formed at the end of 12 weeks.
- (B) In human pregnancy the major organ systems are formed at the end of 8 weeks.
- (C) In human pregnancy heart is formed after one month of gestation.
- (D) In human pregnancy, limbs and digits develop by the end of second month.
- (E) In human pregnancy the appearance of hair is usually observed in the fifth month.

Choose the **correct** answer from the options given below :

- (1) A, C, D and E only
- (2) A and E only
- (3) B and C only
- (4) B, C, D and E only

Answer (1)

Sol. In a human female's pregnancy.

- By the end of 12 weeks (1st trimester), most of major organ systems are formed (not by end of 8 weeks).
- After one month of pregnancy, the embryo's heart is formed.
- By the end of second month of pregnancy, the foetus develops limbs and digits.
- The first movements of foetus and appearance of hair on head are usually observed during the fifth month.

158. Which of the following is an example of non-distilled alcoholic beverage produced by yeast?

- (1) Rum
- (2) Whisky
- (3) Brandy
- (4) Beer

Answer (4)

Sol. Wine and beer are produced without distillation whereas whisky, brandy and rum are produced by distillation of fermented broth.

159. Given below are two statements :

Statement I : In the RNA world, RNA is considered the first genetic material evolved to carry out essential life processes. RNA acts as a genetic material and also as a catalyst for some important biochemical reactions in living systems. Being reactive, RNA is unstable.

Statement II : DNA evolved from RNA and is a more stable genetic material. Its double helical strands being complementary, resist changes by evolving repairing mechanism.

In the light of the above statements, choose the **most appropriate** answer from the options given below :

- (1) Statement I is incorrect but statement II is correct
- (2) Both statement I and statement II are correct
- (3) Both statement I and statement II are incorrect
- (4) Statement I is correct but statement II is incorrect

Answer (2)

Sol. In RNA world, RNA was the first genetic material as there are enough evidences to suggest that essential life processes (such as metabolism, translation, splicing, etc) evolved around RNA. RNA used to act as a genetic material as well as catalyst (there are some important biochemical reaction in living systems that are catalysed by RNA catalysts not by protein enzymes) so, statement I is correct statement II is also correct as DNA being double stranded and having complementary strands further resists changes by evolving a process of repair.

160. Given below are two statements :

Statement I : Transfer RNAs and ribosomal RNA do not interact with mRNA.

Statement II : RNA interference (RNAi) takes place in all eukaryotic organisms as a method of cellular defence.

In the light of the above statements, choose the **most appropriate** answer from the options given below :

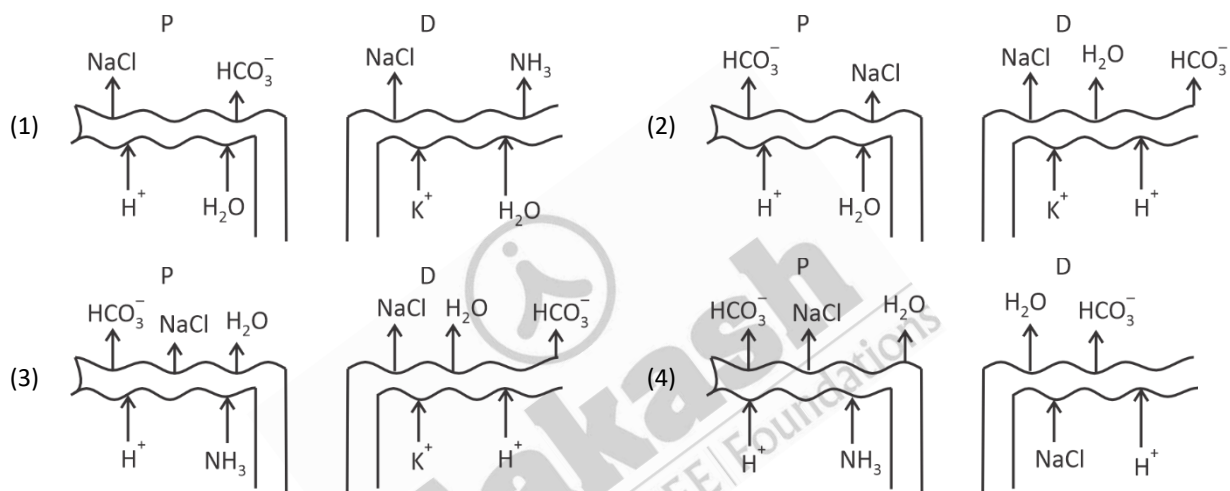
- (1) Statement I is incorrect but statement II is correct
- (2) Both statement I and statement II are correct
- (3) Both statement I and statement II are incorrect
- (4) Statement I is correct but statement II is incorrect

Answer (1)

Sol. Both transfer RNAs and ribosomal RNA interact with mRNA.

RNA interference (RNAi) takes place in all eukaryotic organisms as a method of cellular defence.

161. Which of the following diagrams is correct with regard to the proximal (P) and distal (D) tubule of the Nephron.



Answer (3)

Sol. During urine formation, the tubular cells secrete substances like H^+ , K^+ and ammonia into the filtrate. Tubular secretion is also an important step in urine formation as it helps in the maintenance of ionic and acid base balance of body fluids.

PCT \rightarrow Selective secretion of H^+ , ammonia and K^+ into the filtrate.

DCT \rightarrow Capable of reabsorption of HCO_3^- and selective secretion of H^+ , K^+ and NH_3 .

162. What is the pattern of inheritance for polygenic trait?

- (1) X-linked recessive inheritance pattern
- (2) Mendelian inheritance pattern
- (3) Non-mendelian inheritance pattern
- (4) Autosomal dominant pattern

Answer (3)

Sol. Polygenic inheritance refers to the inheritance of a trait controlled by two or more genes. When human disorders are determined by mutation in the single gene then they are transmitted to the offspring as per Mendelian principle. Polygenic trait shows non-Mendelian inheritance pattern.

163. In the seeds of cereals, the outer covering of endosperm separates the embryo by a protein-rich layer called :

- | | |
|--------------------|----------------|
| (1) Aleurone layer | (2) Coleoptile |
| (3) Coleorhiza | (4) Integument |

Answer (1)

Sol. In monocot seeds, the outer covering of endosperm separates the embryo by a proteinous layer called aleurone layer.

164. Match **List I** with **List II**:

	List-I		List-II
A.	Chlorophyll a	(I)	Yellow-green
B.	Chlorophyll b	(II)	Yellow
C.	Xanthophylls	(III)	Blue-green
D.	Carotenoids	(IV)	Yellow to Yellow-orange

Choose the option with all **correct** matches.

- (1) A-I, B-IV, C-III, D-II
- (2) A-III, B-IV, C-II, D-I
- (3) A-III, B-I, C-II, D-IV
- (4) A-I, B-II, C-IV, D-III

Answer (3)

Sol. A chromatographic separation of the leaf pigments shows that the colour that we see in leaves is not due to single pigment but due to four pigments.

Chlorophyll a	–	Bright or blue-green in the chromatogram
Chlorophyll b	–	Yellow-green
Xanthophylls	–	Yellow
Carotenoids	–	Yellow to Yellow-orange

165. Which of the following genetically engineered organisms was used by Eli Lilly to prepare human insulin?

- (1) Phage
- (2) Bacterium
- (3) Yeast
- (4) Virus

Answer (2)

Sol. The correct answer is bacterium.

In 1983, Eli Lilly, an American company, prepared two DNA sequences corresponding to 'A' and 'B' chains of human insulin and introduced them in plasmids of *E.coli* (a gram negative bacterium) to produce insulin chains.

166. Which of the following are the post-transcriptional events in an eukaryotic cell?

- Transport of pre-mRNA to cytoplasm prior to splicing.
- Removal of introns and joining of exons.
- Addition of methyl group at 5' end of hnRNA.
- Addition of adenine residues at 3' end of hnRNA.
- Base pairing of two complementary RNAs.

Choose the **correct** answer from the options given below :

- C, D, E only
- A, B, C only
- B, C, D only
- B, C, E only

Answer (3)

Sol. The process of copying genetic information from one strand of the DNA into RNA is known as transcription. It occurs in the cytoplasm with the help of transcribing enzyme.

Transport of pre-mRNA to cytoplasm prior to splicing is a part of transcription.

The primary transcript is converted into functional mRNA after post transcriptional processing involves 3 steps as follows-

- Modification of 5' end by capping,
- Tailing,
- Splicing.

Base pairing of two complementary RNA is not an event of post-transcription. Hence, statements B, C, D are post-transcriptional modification events in eukaryotic cell.

167. Match **List-I** with **List-II**.

	List-I		List-II
A.	Centromere	I.	Mitochondrion
B.	Cilium	II.	Cell division
C.	Cristae	III.	Cell movement
D.	Cell membrane	IV.	Phospholipid Bilayer

Choose the **correct** answer from the options given below :

- A-II, B-III, C-I, D-IV
- A-I, B-II, C-III, D-IV
- A-II, B-I, C-IV, D-III
- A-IV, B-II, C-III, D-I

Answer (1)

Sol.

Centromere	-	Helps in cell division
Cilium	-	Helps in cell movement
Cristae	-	Finger like structures of mitochondria
Cell membrane	-	Is a phospholipid bilayer

	List-I		List-II
A.	Alfred Hershey and Martha Chase	I.	Streptococcus pneumoniae
B.	Euchromatin	II.	Densely packed and dark-stained
C.	Frederick Griffith	III.	Loosely packed and light-stained
D.	Heterochromatin	IV.	DNA as genetic material confirmation

(1) A-III, B-II, C-IV, D-I

(2) A-II, B-IV, C-I, D-III

(3) A-IV, B-II, C-I, D-III

(4) A-IV, B-III, C-I, D-II

Heterochromatin are darkly stained region with tightly packed chromatin fibre.

(1) Chromosome 10 (2) Chromosome X
(3) Chromosome Y (4) Chromosome 1

Sol. In human genome, Chromosome 1 has the highest number of genes, *i.e.*, 2968.

- A. High fatality risk to mother
- B. Expensive instruments and reagents
- C. Husband/wife necessary for being donors
- D. Less adoption of orphans
- E. Not available in India
- F. Possibility that the early embryo does not survive

(1) A, B, C, E, F only (2) B, D, F only
(3) A, C, D, F only (4) A, B, C, D only

Husband/wife is not necessary for being donors. IVF is available ins India.

171. Which one of the following is an example of ex-situ conservation?

- | | |
|------------------------|--------------------------------|
| (1) Protected areas | (2) National Park |
| (3) Wildlife Sanctuary | (4) Zoos and botanical gardens |

Answer (4)

Sol. Zoological parks (Zoos), botanical gardens and wildlife safari parks are examples of ex-situ conservation. Sacred groves, biosphere reserves, national parks and wildlife sanctuaries are examples of in-situ conservation.

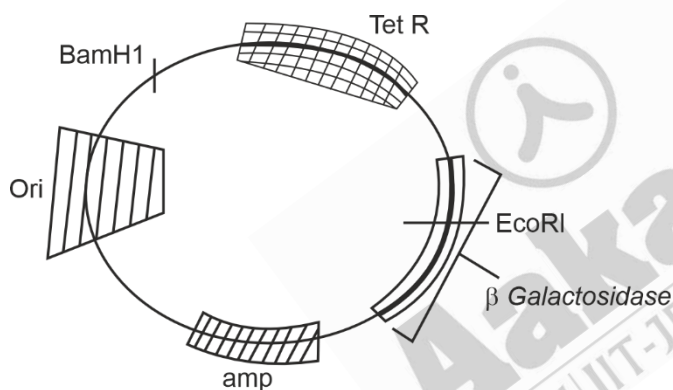
172. A specialised membranous structure in a prokaryotic cell which helps in cell wall formation, DNA replication and respiration is

- | | |
|---------------------------|--------------|
| (1) Endoplasmic Reticulum | (2) Mesosome |
| (3) Chromatophores | (4) Cristae |

Answer (2)

Sol. Mesosome is membranous extension in bacterial cell that helps in cell wall formation, DNA replication and contains enzymes for respiration.

173.



In the above represented plasmid, an alien piece of DNA is inserted at EcoRI site. Which of the following strategies will be chosen to select the recombinant colonies?

- (1) Blue color colonies grown on ampicillin plates can be selected.
- (2) Using ampicillin & tetracycline containing medium plate.
- (3) Blue color colonies will be selected.
- (4) White color colonies will be selected.

Answer (4)

Sol. The correct answer is that white-colored colonies will be selected.

Since an alien piece of DNA is being inserted at EcoRI site, the gene β -galactosidase present here will undergo insertional inactivation.

This gene is responsible for producing blue-colored colonies, but since it has been insertional inactivated, white colored colonies will be produced.

Ampicillin and tetracycline resistance genes present in the given DNA will remain intact. Thus, the given DNA will show amp^R and tet^R .

174. What is the name of the blood vessel that carries deoxygenated blood from the body to the heart in a frog?

- | | |
|----------------------|--------------------|
| (1) Vena cava | (2) Aorta |
| (3) Pulmonary artery | (4) Pulmonary vein |

Answer (1)

Sol. Frog's heart is a muscular structure with three chambers. It receives deoxygenated blood from body parts through the major veins called vena cava. Vena cava carries deoxygenated blood. Aorta and pulmonary vein carries oxygenated blood. Whereas, pulmonary artery will carry deoxygenated blood towards the lungs.

175. Which of following organisms **cannot** fix nitrogen?

- | | |
|-----------------------|------------------------|
| A. <i>Azotobacter</i> | B. <i>Oscillatoria</i> |
| C. <i>Anabaena</i> | D. <i>Volvox</i> |
| E. <i>Nostoc</i> | |

Choose the **correct** answer from the options given below:

- | | |
|------------|------------|
| (1) E only | (2) A only |
| (3) D only | (4) B only |

Answer (3)

Sol. *Azotobacter*, *Oscillatoria*, *Anabaena* and *Nostoc* can fix nitrogen but *Volvox* cannot fix nitrogen.

176. While trying to find out the characteristic of a newly found animal, a researcher did the histology of adult animal and observed a cavity with presence of mesodermal tissue towards the body wall but no mesodermal tissue was observed towards the alimentary canal. What could be the possible coelome of that animal?

- | | |
|---------------------|---------------------|
| (1) Spongocoelomate | (2) Acoelomate |
| (3) Pseudocoelomate | (4) Schizocoelomate |

Answer (3)

Sol. In pseudocoelomates, the body cavity is not entirely lined with mesoderm, instead, mesodermal tissue is present along the body wall but not towards the gut.

- Schizocoelomates are animals whose coelom or body cavity develops middle from a split in the mesoderm, the middle germ layer of the embryo.
- In acoelomates, coelom is absent.

Spongocoel is a central cavity found in Sponges.

177. Which one of the following statements refers to Reductionist Biology?

- | |
|--|
| (1) Behavioural approach to study and understand living organisms |
| (2) Physico-chemical approach to study and understand living organisms |
| (3) Physiological approach to study and understand living organisms |
| (4) Chemical approach to study and understand living organisms |

Answer (2)

Sol. The physico-chemical approach to study and understand living organisms is called 'Reductionist Biology'.

178. Epiphytes that are growing on a mango branch is an example of which of the following?

- (1) Amensalism
- (2) Commensalism
- (3) Mutualism
- (4) Predation

Answer (2)

Sol. Commensalism is the type of interaction in which one-species benefits and another is neither harmed nor benefited. An orchid growing as an epiphyte on a mango branch is an example of commensalism.

179. Which one of the following phytohormones promotes nutrient mobilization which helps in the delay of leaf senescence in plants?

- (1) Cytokinin
- (2) Ethylene
- (3) Absciscic acid
- (4) Gibberellin

Answer (1)

Sol. Cytokinins help to overcome apical dominance. They promote nutrient mobilisation which helps in the delay of leaf senescence.

180. The complex II of mitochondrial electron transport chain is also known as

- (1) NADH dehydrogenase
- (2) Cytochrome bc_1
- (3) Succinate dehydrogenase
- (4) Cytochrome c oxidase

Answer (3)

Sol. Complex II of mitochondrial electron transport chain is also known as succinate dehydrogenase. Cytochrome c oxidase (complex IV), NADH dehydrogenase (complex I), cytochrome bc_1 (complex III).

